

TRIGONOMETRIAE
BRITANNICAE
BOOK TWO PART ONE

CONCERNING PLANE TRIANGLES.

CHAPTER ONE.

With the construction of the Tables resolved, we may proceed towards illustrating the use of these, which is concerned especially with the measurement of triangles. A triangle is a figure understood to have three sides. Moreover a triangle is either *plane* or *spherical*. A plane triangle is one described in a plane ; the three sides of which are right lines. And it is either *right* angled or *oblique* angled. A plane triangle is right because it has a single right angle, and an oblique angled triangle has none. *Eucl.27 D.1.*

If a right angled triangle shall have equal legs [the name sometimes given to the sides of lengths smaller than the hypotenuse in a rt. angled triangle], each angle at the base is half a right angle ; And conversely. *Ram.3.el.8,* Thus, if the remaining angles of the triangle may be equal, then it is right ; And conversely. And if the right line from the vertex of the triangle shall bisect the base into two equal segments, the vertex angle is right.

An oblique angled triangle is *obtuse* angled or *acute* angled.

It is obtuse angled because it has one obtuse angle. *Eucl.28D.1.*

It is acute angled because all the angle are acute. *Eucl. 29D.1.* And thus if an angle of a plane triangle shall be greater than the remaining angles, it is obtuse ; if less than the remaining angles, it is acute. And if the right line from the vertex of the triangle bisecting the base is less than the bisected length, the angle from the vertex is obtuse ; if greater, the angle from the vertex is acute.

The three angles of a triangle are equal to two right angles. *Eucl. 32 p.1.* And thus any two angles of a triangle are less than two right angles. And with a side continued, the exterior angle is equal to the two interior opposite angles.

If a triangle shall be of equal legs, it has an equiangular base : And if it shall be of equal sides, it is also equiangular. *Eucl. 5 & 6 p.6.*

Any two sides of a triangle shall be greater than the remaining side. *Eucl.29 p.1.*

The greater side of a triangle subtends the greater angle; and the greater angle is subtended by the greater side. *Eucl. 19 & 18 p.1.*

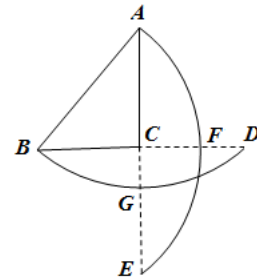
The complements of angles or arcs are said to be for quadrants or semicircles.

CHAPTER II.

PROP. I.

In a right angled triangle ; *If the side subtending the right angle becomes the radius of a circle, the legs will be as the sines of the opposite angles.*

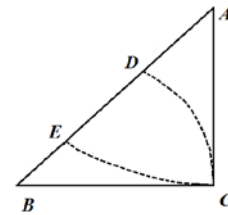
In the right angled triangle ABC, with the interval AB, and from the centres A & B the arcs BGD & AFE are described ; the legs AC & BC will be as the sines of the angles A & B: for they are as half of the subtended [chords] ACE & BCD.



PROP. II.

In a right angle triangle ; *if, from either point with an acute angle , and with the interval of the other leg, a periphery may be described; either leg will be the radius, tangent to the remaining leg, but cutting the hypotenuse (or the sided subtending the right angle).*

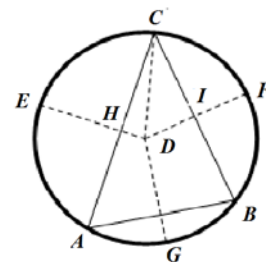
In the right angled triangle ACB, from the point of the angle B, and with the interval of the leg BC, the periphery DC may be described; BC will be the radius, AC will be as the tangent & AB as the secant [of the angle ABC]. Likewise if the periphery AC may be described with the interval AC, AC will be the radius, BC will be as the tangent, and AB the secant of the angle BAC, by Chap.1,Book 1, [of this book].



PROP. III.

In any plane triangle whatever ; *The sides are proportional to the sines of the opposite angles ; and conversely.*

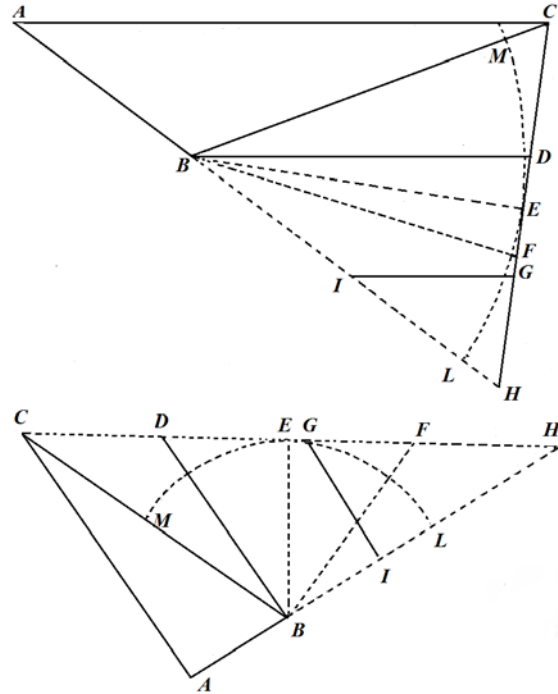
ABC shall be a triangle inscribed in the circle, and from the centre D the perpendicular radii may be drawn DF, DE, DG, bisecting both the peripheries as well as the subtended chords of the peripheries ; also the radius DC may be drawn. And thus because the angle at the centre EDC is equal to the angle at the periphery ABC; and CDF is equal to CAB, *by prop. 20. Book 3. Eucl.* On that account half the sides will be as the sines. Therefore the side CA has the same ratio to the side CB, as the sine CH has to the sine CI. For what the ratio of whole to whole shall be, so the same shall be of half to half.



PROP. III.

In any plane triangle. As the sum of two sides to the difference of the same, thus the tangent of half the sum of the angles to the tangent of half the difference of these.

In an oblique angled triangle ABC, the sides AB, CB shall be known, together with the angle ABC understood from the same, as in the obtuse angled triangle above, and in the acute angled triangle below. And with the side AB continued into H, as far as BH shall be equal to BC, and C & H will be joined. And BI shall be equal to the side AB. Also from the indicated points B & I the right lines BD & IG may be drawn parallel to the side AC. Therefore the exterior angle CBH is equal to the sum of the interior opposite angles *by Prop.32. Book1. Eucl.* For the angle CBD is equal to the angle BCA; & the angle DBH to the angle CAB. In addition from the point B the perpendicular BE may be drawn, which will bisect CH.



Also the radius BE may be drawn to the periphery MEL. And the tangent CE will be half the sum of the opposite angles, & DE (which also is equal to FE) the tangent of half the difference [*i.e.* in proportion]. And thus because AC, BD, & IG are parallel, CD, DG, & FH shall be equal; & and thus DF & GH will be equal. And thus I say

The proportions are :

AH (or related by an	}	AH Sum of the two sides.
IH equation of		IH Difference of the two sides.
CH the proportions) :		CE Tangent $\frac{1}{2}$ of half the sum of the opposite angles.
CH=DF		DE Tangent $\frac{1}{2}$ of half the difference of the angles.

[In modern notation, we have : $\frac{a+c}{a-c} = \frac{\tan \frac{A+C}{2}}{\tan \frac{A-C}{2}}$.]

Otherwise.

So that the sum of the sides, shall be to the greater side doubled: thus as the tangent of half the sum of the opposite angles, to the sum of the tangents of half the sum and of half the difference of the angles.

$$\text{[i.e. : } \frac{a+c}{2a} = \frac{\tan \frac{A+C}{2}}{\tan \frac{A-C}{2} + \tan \frac{A+C}{2}} \text{.]}$$

And again :

So that the sum of the sides, shall be to the lesser side doubled: thus as the tangent of half the sum of the opposite angles to the difference of the tangents of half the sum and half the difference of the angles.

$$\text{[i.e. : } \frac{a+c}{2c} = \frac{\tan \frac{A+C}{2}}{\tan \frac{A+C}{2} - \tan \frac{A-C}{2}} \text{.]}$$

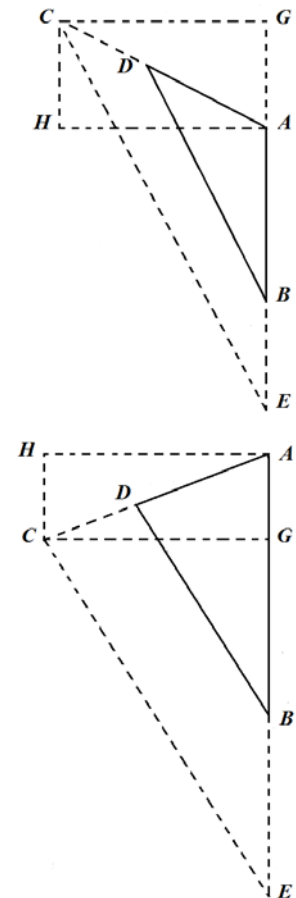
It is possible to put these in place from the preceding proposition with the adjoining diagrams [, or simply from the properties of simple proportions].

This fourth proposition even now can be expressed otherwise.

As the lesser side to the greater side : thus the secant of the complement or excess of the angle taken to the fourth proportion.

Thus the fourth prop. itself may be put [into a ratio] together with the tangent of the complement or the excess. Then if the given angle shall be obtuse, the sum is the tangent of the complement of the angle of the smaller side opposite: if acute, the difference is the tangent of the complement of the angle of the smaller side opposite.

In the oblique angled triangle ABD, the sides AB, AD, shall be known, together with the angle BAD contained by these, in the upper obtuse angled triangle, and also in the lower acute angled triangle. And with the sides AB, AD continued as far as to E & C; from the point C the right line CE may be drawn parallel to the side DB, together with CG perpendicular to the right line AE where there is a need for it to be continued. From the same point A, the right line AH may be drawn equal and parallel to the right line CG, which may be joined to the perpendiculars CH & AG: and thus the oblique angled triangles DAB and CAE may be equated by *prop. 4 & 5. Book 6. Eucl.* Likewise the right angled triangles CAH, ACG, by *prop.8. Book1. Eucl.* And there will be CG = AH, the radius ;



GA = HC , the tangent ; & CA the secant, by *prop.2.* of this Chapter. I say :

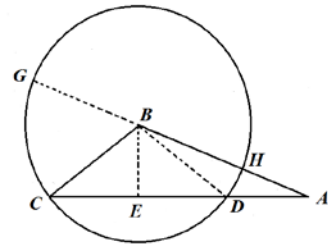
Proportions. $\left\{ \begin{array}{l} \text{DA} \text{ Lesser side.} \\ \text{AB} \text{ Greater side.} \\ \text{CA} \text{ Secant of the Complement or the excess of the given angle.} \\ \text{AE} \text{ Fourth Prop.} \end{array} \right.$

The fourth prop. may be associated with GA itself, with the tangent of the angle GCA. Then if the angle taken may be oblique, Then if the angle taken shall be oblique, the sum will be BE, but if the angle shall be acute, the difference will be BE, the tangent of the angle GCE ; the complement of which shall be CEG, equal to the angle DBA; And thence the angle ADB left by the complement.

PROP. V.

In some plane triangle : *As the base is to the sum of the sides, thus the difference of the sides to the difference of the segments of the base.*

In the oblique angled triangle ABC, the base shall be CA, The sum of the sides GA, the difference of the sides HA, the difference of the segments of the base AD. The perpendicular BE may be drawn bisecting CD in E. And thus because the rectangle AC, AD is equal to the rectangle AG, AH by *prop.*

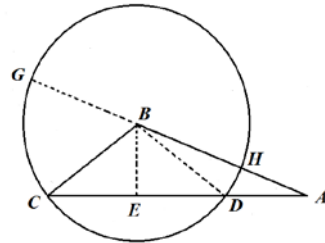


36. *Book 1 Eucl.* therefore the sides of these are inversely proportional. I say, therefore :

Proportions $\left\{ \begin{array}{l} \text{AC} \text{ Base.} \\ \text{AG} \text{ Sum of sides.} \\ \text{AH} \text{ Difference of sides.} \\ \text{AD} \text{ Difference of base segments. Thence the segment AE or CE.} \end{array} \right.$

Otherwise.

The difference of the squares may be taken from the sides BC, BA, and divided by the base CA, the quotient will be the difference of the segments of the base DA.



Or again.

The sides AB, BC and CA may be squared, & the square BA taken from the rest, half of the remainder may be divided by the base, and the quotient will be CE less the segment of the base.

And by taking the square CB from the squares BA, AC, half of the remainder divided by the base will give the quotient AE, the greater segment of the base.

[Essentially the cosine rule.]

CHAPTER III.

The manner of changing sexagesimal parts into decimals, and vice versa.

The given parts [*i.e.* fractions] may be reduced to the other name, if the number of given parts may be multiplied by the new name, and the product divided by the name of the given parts ; the quotient will be the number of parts sought.

Let the given parts be $\frac{12}{60}$, and the new given name shall be $\frac{\quad}{100}$; the number is sought for this name thus agreeing so that the parts found shall be equal to the given parts.

$$\text{Proportions.} \left\{ \begin{array}{ll} \text{Given name} & 60 \\ \text{Number given} & 12 \\ \text{Number assumed} & 100 \\ \text{Number found} & 20 \end{array} \right. \quad \frac{12}{60} \text{ equals } \frac{20}{100}.$$

And thus if the name accepted may multiply the given number, and the product may be divided by the given name, the quotient will be the number sought. And from the given minutes or sixtieth parts (since nothing will change on multiplying by 100) division by 6 is made, and the quotient will be the numerator sought.

So that 29 Degrees, 27' may be put in place thus 29^{27} , and 27 is divided by 6, and the quotient put in place thus below $29^{\text{27}} \frac{45}{100}$, the quotient is $\frac{45}{100}$, and this will be the number sought, & 29 Deg. 27' shall be equal to $29^{\frac{45}{100}}$.

[Recall that Briggs in Part One had used decimal fractions of degrees as an easier alternative in calculations rather than minutes and seconds of arc, a suggestion not adopted at the time by others.]

Thus the diurnal motion of the moon in the works of *Copernicus* 12 Deg. 11':26":41"' : 31"' : is reduced to 12.19074776. Thus the motion of the sun in 44 days, 43 Deg. 22':0";19"' : is reduced to 433667546.

31	19
4151667	0031667
26691944	220052777
114448657	4336675463
1219074776	100000000
100000000	

It is made easier with the aid of the adjoining table, with the decimal parts added corresponding to the first, second, the third and the fourth minutes in a single sum, thus

11 <i>first minutes correspond to</i> 1833,333,333	22 <i>Min. correspond to</i> 3666,666,667
26 <i>from the second</i> 72,222,222	0 <i>Seconds</i> 0
41 <i>from the third</i> 1,898,148	19 <i>from the third</i> 879,630
31 <i>from the fourth</i> <u>23,920</u>	<i>Providing</i> <u>3667,546,297</u>
<i>Providing the decimal</i> 1907,4771623	

If on the other hand given hundredth parts shall be reduced to sexagesimals, the multiplication of the given parts by 60, the product divided by 100 (that is, with two placed removed by us) will give the number of minutes. For example.

There shall be given 2445 degr., the number of minutes is sought equal to the parts $\frac{45}{100}$. Perform the multiplication of the number 45 by 60, the product will be 2700; I say, that with two zeros removed, 27 minutes is equal to 45 hundredths. Thus, let the diurnal motion of the moon be 1219074776 degr., the multiplication of the part 19074776 by 60 is performed, the first factor arises 1144486560; and the diurnal motion of the moon shall be 12 degr. $11\frac{44486560}{100000000}$ minutes.

Transl. Ian Bruce.

Table for the reduction of sexagesimal to decimals parts, & vice-versa.

<i>Sexag.</i>	<i>First corr. minutes</i>	<i>Second</i>	<i>Third</i>	<i>Fourth</i>	<i>Fifth.</i>
1	0166,666,667	0002,777,778	0000,046,296	0000,000,772	0000,000,013
2	0333,333,333	5,555,555	, 92,593	, 1,573	, ,026
3	0500,000,000	8,333,333	,138,889	, 2,315	, ,039
4	0666,666,666	11,111,111	,185,185	, 2,315	, ,051
5	0833,333,333	13,888,889	,231,481	, 3,046	, ,064
6	1000,000,000	16,666,667	,277,778	, 4,630	, ,077
7	1166,666,667	19,444,444	,324,074	, 5,401	, ,090
8	1333,333,333	22,222,222	,370,370	, 6,173	, ,103
9	1500,000,000	25,000,000	,416,667	, 6,944	, ,116
10	1666,666,667	27,777,778	,462,963	, 7,716	, ,129
11	1833,333,333	30,555,556	,509,259	, 8,488	, ,141
12	2000,000,000	33,333,333	,555,556	, 9,259	, ,154
13	2166,666,667	36,111,111	,601,852	,10,031	, ,167
14	2333,333,333	38,888,889	,548,148	,10,802	, ,180
15	2500,000,000	41,666,667	,694,444	,11,574	, ,193
16	2666,666,667	44,444,444	,740,741	,12,345	, ,206
17	2833,333,333	47,222,222	,787,037	,13,117	, ,219
18	3000,000,000	50,000,000	,833,333	,13,889	, ,232
19	3166,666,667	52,777,778	,879,630	,14,660	, ,245
20	3333,333,333	55,555,555	,925,926	,15,432	, ,258
21	35,00,000,000	58,333,333	,972,222	,16,204	, ,270
22	3666,666,667	61,111,111	1,018,578	,16,975	, ,283
23	3833,333,333	63,888,889	1,064,814	,17,747	, ,296
24	4000,000,000	66,666,667	1,111,111	,18,518	, ,309
25	4166,666,667	69,444,444	1,157,407	,19,290	, ,322
26	4333,333,333	72,222,222	1,203,703	,20,062	, ,335
27	4500,000,000	75,000,000	1,250,000	,20,833	, ,348
28	4666,666,667	77,777,778	1,296,296	,21,605	, ,360
29	4833,333,333	80,555,555	1,342,592	,22,376	, ,373
30	5000,000,000	83,333,333	1,388,888	,23,148	, ,386
31	5166,666,667	86,111,111	1,435,184	,23,920	, ,399
32	5333,333,333	88,888,889	1,481,481	,24,691	, ,412
33	5500,000,000	91,666,667	527,777	,25,463	, ,425
34	5666,666,667	94,444,444	1,574,073	,26,234	, ,438
35	5833,333,333	97,222,222	1,620,370	,27,006	, ,450
36	6000,000,000	100,000,000	1,666,666	,27,778	, ,463
37	6166,666,667	102,777,778	1,712,963	,28,549	, ,476
38	6333,333,333	105,555,555	1,759,259	,29,321	, ,489
39	6500,000,000	108,333,333	1,805,556	,30,092	, ,502
40	6666,666,667	111,111,111	1,851,852	,30,864	, ,515
41	6833,333,333	113,888,889	1,898,148	,31,636	, ,527
42	7000,000,000	116,666,667	1,944,444	,32,407	, ,540
43	7166,666,667	119,444,444	1,990,740	,33,179	, ,553
44	7333,333,333	122,222,222	2,037,037	,33,950	, ,566
45	7500,000,000	125,000,000	2,083,333	,34,722	, ,579
46	7666,666,666	127,777,778	2,129,629	,35,494	, ,592
47	7833,333,333	130,555,555	2,175,925	,36,265	, ,605
48	8000,000,000	133,333,333	2,222,222	,37,037	, ,618
49	8166,666,667	136,111,111	2,268,518	,37,808	, ,630
50	8333,333,333	138,888,889	2,314,815	,38,580	, ,643
51	8500,000,000	141,666,667	2,361,111	,39,352	, ,656
52	8666,666,667	144,444,444	2,407,407	,40,123	, ,669
53	8833,333,333	147,222,222	2,453,703	,40,895	, ,682
54	9000,000,000	150,000,000	2,500,000	,41,666	, ,694
55	9166,666,667	152,777,778	2,546,296	,42,438	, ,707
56	9333,333,333	155,555,555	2,592,592	,43,210	, ,720
57	9500,000,000	158,333,333	2,638,889	,43,981	, ,733
58	9666,666,667	161,111,111	2,685,185	,44,753	, ,746
59	9833,333,333	163,888,889	2,731,481	,45,524	, ,759

These decimal parts 44486560 are reduced in the same manner to minutes of the second order on multiplying by 60, thus :

1144486560
2669193600
4151616000
3096960000
5817600000

And in the same manner decimals of the second order can be reduced to minutes of the third order, &c.

Thus the motion of the sun in 44 days is :

Likewise the motion of the sun in 44 days is 43 degr. 22': 00":19".

Degr. 4336675463

2200527780

0031666800

190008000

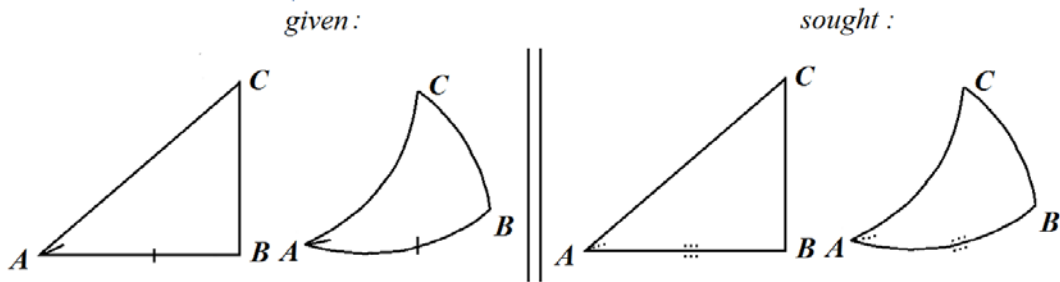
Note: *with eight places removed everywhere from the product, evidently just as many places are in the numerator as in the given parts ; the parts remaining are the first, second, third minutes etc.*

With the aid of the preceding table, it is permitted by continued subtraction to acquire the sexigesimals corresponding to these also, the nearest of the smaller parts of the decimals found in that fraction from the given decimal. Thus

<i>Parts given</i> 1907,477,6	<i>Parts given</i> 3667,546,3
<i>Found</i> <u>1833,333,3</u> ... 11 <i>First Min.</i>	<i>Found</i> ... <u>3666,666,6.</u> <u>22</u> <i>First Min.</i>
74,144,3	879,7 0 <i>Second</i>
<i>Found</i> ... <u>72,122,2</u> 26 <i>Second.</i>	<i>Found</i> ... 879,6, 19 <i>Third.</i>
1,922,1	
<i>Found</i> ... <u>1,898,1</u> 41 <i>Third.</i>	
24,0	
<i>Found</i> ... 23,9..... 31 <i>Fourth.</i>	

*CHAPTER III.**The measurement of plane right angled triangles.*

In the solutions of all triangles, the diagrams are expressed thus :



Besides both in plane as well as in spherical right angled triangles, the side subtending the right angle is called the *hypotenuse*, so that the side AC subtends the angle ABC. And moreover so that the sides AB, CB containing the right angle are called the *legs*. In addition it may be known trigonometrically, in the measurement of triangles by the rule of proportion in which there are four terms, that three are given, and the fourth is sought ; If the terms of the ratio shall be sines, tangents, secants or sides, with the product of the second and third divided by the first, the quotient will show the fourth.

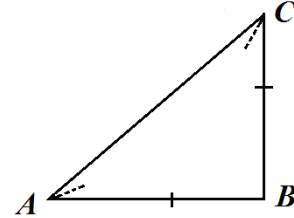
But if the terms of the ratio shall be the logarithms of sines tangents, secants or sides ; If from the sum of the logarithms of the second and the third and the logarithm of the first may be subtracted, the difference will be the logarithm of the fourth.

PROB. 1.

With the legs given, either angle is sought.

In the right angled triangle ABC, either acute angle is sought.

$$\text{from the given legs } \begin{cases} \text{AB} & 11237943 \\ \text{BC} & 6058601 \end{cases}$$



Terms of the ratio:

$$\text{Proportions. } \begin{cases} \text{Either leg.} \\ \text{The remaining leg.} \\ \text{Radius.} \\ \text{Tangent of the angle of the remaining opposite leg, by Prop.2.Chap.2.} \end{cases}$$

Shown by arithmetic :

	<i>Legs & Tang.</i>	<i>Logarith. legs & Tang.</i>
$\left\{ \begin{array}{l} \text{Leg AB} \\ \text{Leg remaining BC} \\ \text{Radius AB} \\ \text{Tangent BAC gr. } 2833 \end{array} \right.$	$\left\{ \begin{array}{l} 11237943 \\ 6058601 \\ 10000,00000 \\ 53912,01159 \end{array} \right.$	$\left\{ \begin{array}{l} 3,05068,6815 \\ 2,78237,2352 \\ 10,00000,0000 \\ 9,73168,5537 \end{array} \right.$

Hence for the complement BCA gr.6167.

Note. The logarithms of the sides are desired from the *Chiliad of Logarithms* or from the *Arithmetica Logarithmica* of the most learned *Mr. Briggs*. Which truly itself is negative, and this table will be satisfied by a positive logarithm, but we may reject the characteristic, and substitute another (so that the negative numbers are removed). Because if they may not occur accurately in that, yet they are able to be obtained by a proportional part closely ; Thus for example : The leg BC 6058601 being sought in the tables, we come upon that among the tangents near to Gr. 3121, of which the logarithm is 9,78237,23521. Thus with the number nine or the characteristic excluded, we have substituted the number two, always by increasing or decreasing the characteristic by a number of places beyond the place of unity. So that if the whole number shall be placed together, such decimal parts shall be distinguished from these whole parts by a line drawn below; [using logs,] a whole number is permitted to be written in several notations, yet the characteristic of that considers only these noted in which whole units are written, so that no account will be had of the numbers noted following subsequently, by which the parts adjoined may be expressed. So that :

Transl. Ian Bruce.

Otherwise.

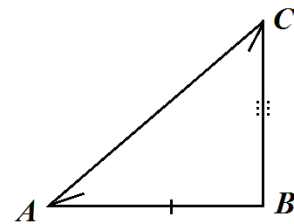
Proportions. { *Leg given.*
Hypotenuse given.
Radius.
Secant of the angle enclosed by the sides given.

But there is no need for this variation, on account of the easy use of logarithms.

PROB. 3.

With the angles and a leg given, the remaining leg is sought.

In the right angled triangle ABC the leg BC is sought.



From the given { leg AB 11237943
 with the angles { ACB gr.6167
 BAC gr.2833

Terms of the ratio

Proportions. { *Radius.*
Tangent of the adjacent angle for the given leg.
Leg given.
Leg sought. per Prop.2.Cap.2.

Shown by numbers.

Tang. & legs. Log.Tan. & legs.

Proportions. { Radius AB 100000,00000 . . 100000,00000
 Tangent BAC gr.2833 . 53912,01159 . . 9,73168,5536
 Leg AB 11237943 . . 3,05068,6815
 Leg BC 6058601 . . 2,78237,2351

Otherwise.

$$\text{Proportions.} \left\{ \begin{array}{l} \text{Sine of the opposite angle for a given leg.} \\ \text{Sine of the angle for the leg sought.} \\ \text{Leg given.} \\ \text{Leg sought.} \end{array} \right.$$

Otherwise.

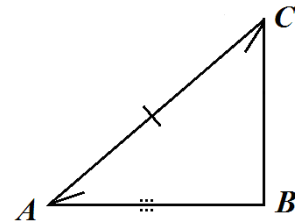
$$\text{Proportions.} \left\{ \begin{array}{l} \text{Tangent of the opposite angle for the given leg.} \\ \text{Radius.} \\ \text{Leg given.} \\ \text{Leg sought.} \end{array} \right.$$

PROB. 4.

*With the hypotenuse & angles given,
 either leg is sought.*

In the right angled triangle ABC the leg AB is sought.

$$\text{From the given} \left\{ \begin{array}{l} \text{hypotenuse AC} \dots\dots 12767067 \\ \text{with the angles} \left\{ \begin{array}{l} \text{ACB gr.}6167 \\ \text{BAC gr.}2833. \end{array} \right. \end{array} \right.$$



Terms of the ratio.

$$\text{Proportions.} \left\{ \begin{array}{l} \text{Whole sine.} \\ \text{Sine of the angle adjacent to the legs sought.} \\ \text{Hypotenuse given.} \\ \text{Leg sought. per Prop.1.Cap.2.} \end{array} \right.$$

Transl. Ian Bruce.

Shown by arithmetic.

		<i>Sine. & Sides</i>	<i>Log.Sin. & Sides.</i>
<i>Proportions.</i>	{ Whole sine	100000,00000	. . . 10,00000,0000
	{ Sine ACB gr.6167 . .	88022,90008	. . . 9,94459,5673
	{ Hypotenuse AC . . .	12767067	. . . 3,10609,1142
	{ Leg AB	11237943	. . . 3,05068,6815

The problem itself can be solved by secants and tangents, but we omit the use of these purposely as redundant.

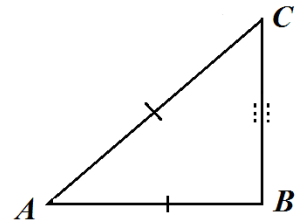
PROB. 5

With the hypotenuse and a leg given, the remaining leg is sought.

In the right angled triangle ABC the leg BC is sought,

with the given $\left\{ \begin{array}{l} \text{hypotenuse AC} \dots\dots 12767067 \\ \text{leg AB} \dots\dots 11237943. \end{array} \right.$

47 *Prop. 1.Eucl.* supplies the Solution of this problem. For because in the right angled triangle the hypotenuse can be equated to the legs ; on that account the difference of the squares of the hypotenuse and of a leg will be the leg sought [by setting up a proportionality]. Anyone who wishes to acquaint themselves with arts of this kind, should consult the most learned Briggs, *Arith. Logarith.*, Ch.18. & 19. Because truly it is our present intent, to illustrate the use of the tables, thus we will approach this problem itself with others following with the help of this work, by agreeing on a twofold exercise for the solution of this ; of which first the angle, then the leg is shown.



Terms of the ratio.

I. by Prob.2.

Proportions. { *Hypotenuse given.*
Leg given.
Whole sine.
Sine of the adjacent angle for the leg sought. per Prop.1.Cap.2.

II.

II. by Prob.3.

Proportions. { *Whole sine.*
Sine adjacent angle for leg sought.
Hypotenuse given.
Leg sought. | *Radius.*
Tangent adjacent angle for leg given.
Leg given.
Leg sought.

Shown by arithmetic.

I. *Sides & Sines.*

Log.Sides.& Sines.

Proportions. { Hypotenuse AC . . . 12767067 . . . 3,10609,1142
 Leg AB . . . 11237943 . . . 3,05068,6815
 Whole Sine . . . 100000,00000 . . . 10,00000,0000
 Sine ACB gr.6167 . . . 88022,90008 . . . 9,94459,5673

II.

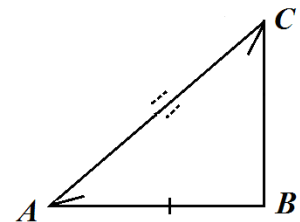
Proportions. { Whole sine 100000,00000 . . . 10,00000,0000
 Sine angle CAB gr.2833 . . . 47454,91609 . . . 9,67628,1209
 Hypotenuse AC 12767067 . . . 3,10609,1142
 Leg BC 6058601 . . . 2,72837,2351

PROB. 6.

With the angles and a leg given, the hypotenuse is sought.

In the right angled triangle ABC the hypotenuse AC is sought.

From the given { leg AB 11237943
 with the angles { ACB gr.6167
 BAC gr.2833



Transl. Ian Bruce.

Terms of the ratio.

Proportion. { *Sine of the angle for the opposite leg*
Whole sine.
Leg given.
Hypotenuse sought. per Prop.1.Cap.2.

Shown by Arithmetic.

		<i>Sines & Sides</i>	<i>Log.Sin. & Sides.</i>
Proportions.	{	Sine ACB gr.6167 . 88022,90008	. . 9,94459,5673
		Whole Sine 100000,00000	. . 10,00000,0000
		Leg AB . . 11237943	. . 3,05068,6815
		Hypotenuse AC . . 12767067	. . 3,10609,1142

Otherwise

Terms of the ratio.

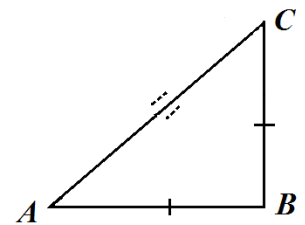
Proportions. { *Radius.*
Secant of the adjacent angle for the given leg.
Leg given.
Hypotenuse sought. per Prop.2.Cap.2.

PROB. 7.

With the legs given the hypotenuse is sought.

In the right angled triangle ABC the hypotenuse AC is sought.

From the given { legs { AB 11237943
 BC 6058601.



Terms of the ratio.

1. For either acute angle

Proportions. { *Either leg.*
Remaining leg.
Radius.
Tangent of the angle for the remaining opposite leg, by Prop.2.Cap.2.

II. For the hypotenuse

Proportions. { *Sine of the angle for the leg opposite.* | *Radius*
Leg opposite to that angle. | *Secant of the angle for the adjacent leg*
Whole sine. | *Leg for the adjacent angle*
Hypotenuse sought. | *Hypotenuse sought.per Prop.2Cap.2.*

Shown by numbers.

		<i>Legs & Tans. I</i>	<i>Logs.Legs. & Tans.</i>
Proportions.	{	<i>Leg AB</i> 11237943 3,05068,6815	
		<i>Leg BC</i> 6058601 2,78237,2352	
		<i>Radius AB</i> 100000,00000 10,00000,0000	
		<i>Tangent BAC</i> gr. 2833 53912,01159 9,73168,5537	
		<i>Sines & Sides. II</i>	<i>Logs.Sin. & Sides.</i>
Proportions.	{	<i>Sine CAB</i> gr.2833 47454,91609 9,67628,1209	
		<i>Whole Sine</i> 100000,00000 10,00000,0000	
		<i>Leg BC</i> 6058601 2,78237,2352	
		<i>Hypotenuse AC</i> 12767067 3,10609,1142	

CHAPTER V.

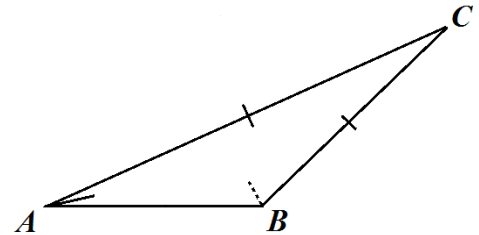
The measurement of plane oblique angled triangles.

PROB. 1.

With two given sides and with either of the opposite angles given, the angle opposite to the remaining side is sought.

In the oblique angled triangle ABC the obtuse angle ABC is sought.

From the given $\left\{ \begin{array}{l} \text{sides } \left\{ \begin{array}{l} \text{AC } 12767067 \\ \text{BC } 8651765 \end{array} \right. \\ \text{with the angle CAB gr. } 374454. \end{array} \right.$



Terms of the ratio.

Proportions. $\left\{ \begin{array}{l} \text{the one side.} \\ \text{the other side.} \\ \text{Sine of the angle opposite the one side.} \\ \text{Sine of the angle opposite the other side. per Prop.3.Cap.2.} \end{array} \right.$

Shown by arithmetic.

	<i>Sides & Sines.</i>	<i>Logs.Sides. & Sines.</i>
<i>Proportions.</i>	Side BC <u>8651765</u> 2,93710,4743
	Side AC <u>12767067</u> 3,10609,1142
	Sine BAC gr. <u>374454</u> 60800,51245 <u>9,78390,7237</u>
	Sine ABC gr. <u>1162064</u> 89720,90422 12,88999,8379 <i>Sum</i>
	 9,95289,3642 <i>Differ.</i>

Hence by the complement the remaining angle is gr. 263482.

Note. If the given angle shall be obtuse, the side opposite to that will be greater than any of the rest, and the remaining two angles will be acute. But if the remaining angle shall be acute and the sides may be given, it will be uncertain whether the angle of the greater side opposite shall be obtuse, right, or acute ; yet the fourth proportion shall be the same, surely the sine of an acute angle or its complement to two right angles.

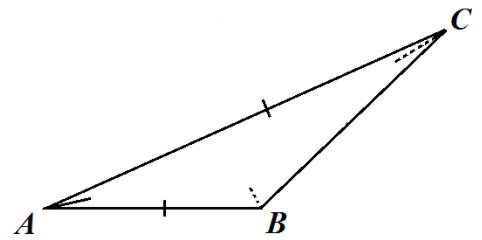
Therefore in order that we know what kind of angle the largest side is placed opposite, the largest sum and difference is taken of the sides, and the mean (or the smallest) logarithm of these it taken : and if the half of these logarithms is equal to the logarithm of the third side, the maximum angle of the opposite side is right. But if the logarithm of the third side is more than half, the angle will be acute: and if less, obtuse. [A result that we could relate to the cosine rule also]. Just as the most learned *Mr. Briggs* has indicated in Ch.18. of the *Arith. Logarithmica, London Edition*.

PROB. 2.

With two sides given with the angle between them taken, either other angle is sought.

In the oblique angled triangle ABC either the angle B or C is sought.

From the given $\left\{ \begin{array}{l} \text{sides} \left\{ \begin{array}{l} AC \quad 12767067 \\ AB \quad 6315525 \end{array} \right. \\ \text{with the angle BAC gr. } 374454 \end{array} \right.$



Terms of the ratio.

Proportions. $\left\{ \begin{array}{l} \text{Sum of the sides.} \\ \text{Difference of the sides.} \\ \text{Tangent of half the sum of the opposite angles;} \\ \text{or of half the complement of the angles taken.} \\ \text{Tangent of half the difference of the opposite angles.} \end{array} \right.$

Transl. Ian Bruce.

Shown by numbers.

Side AC	<u>12767067</u>
Side AB	<u>6315525</u>
Sum of the sides	<u>19082592</u> D
Difference of the sides	<u>6451542</u> E
Twice the greater side	<u>25534134</u> G
Twice the smaller side	<u>12631050</u> H
Given included angle	gr. <u>374454</u>
The whole circle	gr. <u>1800000</u>
Sum of the remaining	gr. <u>1425546</u>
Half the sum	gr. <u>712773</u> F

	<i>Sides & Tans.</i>	<i>Logs. Sides. & Tans.</i>	
<i>Proports.</i> {	Sum of the sides D	<u>19082592</u>	3,28063,7363
	Difference of the sides E	<u>6451542</u>	2,80966,3527
	Tan. $\frac{1}{2}$ sum of the angles F <u>712773</u>	295052,31525.	<u>10,46989,9013</u>
			13,87702,0138 <i>sum.</i>
	Tangent $\frac{1}{2}$ difference gr. <u>449291</u>	99752,82205	9,99892,5177 <i>diff.</i>
To this half sum of the angles	gr. <u>712773</u>	<u>712773</u>	
If the half difference is added	gr. <u>449291</u> . But if the $\frac{1}{2}$ differ. is subtr.	<u>449291</u>	
The obtuse angle ABC is gr. <u>1162064</u> . The acute angle ACB remains		<u>263482</u>	

Otherwise.

	<i>Sides & Tans.</i>	<i>Log. Sides & Tans.</i>	
<i>Proportions.</i> {	Sum of the sides	<u>19082592</u> D	3,28063,7363
	Greater side doubled	<u>25534134</u> G	3,40712,1125
	Tan. $\frac{1}{2}$ sum of the angles <u>712773</u> F.	295052,31525.	<u>10,46989,9013</u>
	Sum tangents of $\frac{1}{2}$ sum &		13,87702,0138
	$\frac{1}{2}$ difference of angles	<u>394805,13730</u>	10,59638,2775
Difference of tangents is.	99752,82205		
Arc agreeing to this difference is	<u>449291</u>		
Half the sum of opp. angles	<u>772773</u>		
Sum is the angle ABC	<u>1162064</u>		
Difference is the angle ACB	<u>263482</u> .		

Transl. Ian Bruce.

Otherwise		<i>Sides & Tans.</i>	<i>Logs. Sides & Tans.</i>
<i>Proportions.</i>	Sum of sides	1908 <u>2592</u> D	3,28063,7363
	Lesser side doubled	1263 <u>1050</u> H	3,10143,9454
	Tan. $\frac{1}{2}$ sum of angles	<u>712773</u> F. 295052,31525.	<u>.10,46989,9013</u>
	Difference of tangents $\frac{1}{2}$ sum &		13,87702,0138
	$\frac{1}{2}$ difference of angles opp.	<u>195299,49319</u>	10,29070,1104
Difference of tangents is		<u>99752,82206</u>	
for this difference of the tangents the arc agrees		<u>449291</u>	
Half the sum of the angles opp.		<u>712773</u>	
Sum of these is the angle		ABC	<u>1162064</u>
Difference is the angle		ACB	<u>263482</u> as above.

Otherwise.

Clearly with the same given sides retained AC 12767067 & AB 6315525 maintaining the same acute angle, Gr. 374454. Of which complement Gr. 525546, the secant is 164472,30008 and the tangent 130580,00340.

	<i>Sides.</i>	<i>Log. sides.</i>
Lesser side AB	<u>6315535</u>	. . 2,80040,9454
Greater side AC	<u>12767067</u>	. . 3,10609,1142
Secant compl. of included angle	164472,3001	. . <u>0,21609,2763</u>
		. . 3,32218,3905
Fourth prop.	<u>332486,6875</u>	0,52177,4451

From the fourth compl. of the tan. 130580,0034 is taken

Difference will be the tangent gr. 636518 201906,6941

Of which the complement is gr. 263482, the angle ACB opp. the smaller side ; and thence the obtuse angle by the complement 1162064.

But if the included angle shall be obtuse, clearly Grad.1162064 the excess of which is

$$262064 \left\{ \begin{array}{l} \text{The secant is } 111456,74557 \\ \text{The tangent is } 48219,97608 \end{array} \right\} \text{And the sides } \left\{ \begin{array}{l} \text{AB } 6315525 \\ \text{BC } 8651765 \end{array} \right\} \text{There will be}$$

	<i>Sides.</i>		<i>Logs.sides.</i>
Lesser side AB	6315535	. .	2,80040,9454
Greater side BC	8651765	. .	2,93710,4737
Secant compl. of included angle 11145,74557		. .	<u>0,04710,6357</u>
		. .	2,98421,1094
Fourth prop.	152686,84239	. .	0,18380,1640

To this forth prop. add the tangent

of the excess angle 49219,97608

Sum is the tangent 636518 201906,81847

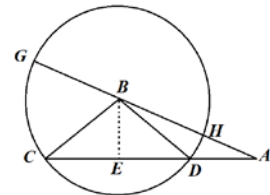
Of which the compl. is 263482 the angle ACB of the opposite lesser side ;
and thence the acute angle BAC 37445 as above.

PROB. 3.

With the individual sides given, any angle is sought.

In the oblique angled triangle ABC any angle is sought, for example BAC

$$\text{From the given individual sides } \left\{ \begin{array}{l} \text{AC } 12767067 \\ \text{AB } 8651765 \\ \text{BC } 6315525 \end{array} \right.$$



For the solution of this problem two operations are required ; The first for the segment of the base DA. The second for the angle sought.

I. For the segment DA.

Terms of the ratio.

$$\text{Proportions. } \left\{ \begin{array}{l} \text{Greatest side, or base.} \\ \text{Sum of the other sides.} \\ \text{Difference the other sides.} \\ \text{Difference of the Base segments.} \end{array} \right.$$

Shown by numbers.

	<i>Sides & Tans.</i>	<i>Log.Sides. & Tans.</i>	
<i>Proportions.</i> {	Greatest side AC	12767067	3,10609,1142
	Sum of the others AB, BC	<u>14965525</u>	3,17514,3173
	Difference of the others HA	<u>2336240</u>	<u>2,36851,7458</u>
			5,54366,0621
	Difference of base segments	2738858	2,43756,9479
Difference of this & base CD	10028209		
Half of which is CE or DE	5014145		
Thence AE	<u>7752962</u>		

From these segments constructed, we can arrive at any angle of the triangle by *Prob.2.Cap.3*. We have selected the angle ECB.

Terms of the ratio.

<i>Proportions.</i> {	<i>Leg given.</i>
	<i>Hypotenuse given.</i>
	<i>Radius.</i>
	<i>Secant of the angle taken from the given.</i>

Shown by Arithmetic.

	<i>Sides & Secant.</i>	<i>Logs.Sides & Secant.</i>	
<i>Proportions.</i> {	Leg given CE.	50141045	2,70019,3336
	Hypotenuse CB	<u>6315525</u>	2,80040,9454
	Radius	100000,00000	10,00000,0000
	Secant of angle ECB gr. <u>374454</u>	125955,19299	10,10021,6118

Truly because here the table does not show the logarithm of the secant, yet if twice the radius is subtracted from this fourth proportion, what is returned is the logarithm of the secant ; The logarithm of sine of the complement of the angle ECB will remain. For example :

Transl. Ian Bruce.

Twice the log. of the radius . . . 20,00000,0000
 Logarithm of the secant 10,10021,6118
 Log.Sine CBE gr. 525546 . . . 9,89978,3882
 Therefore angle ECB is gr.374454.

Or

	<i>Sides & Sines.</i>	<i>Logs.Sides. & Sines.</i>
<i>Proportions.</i>	Hypotenuse CB	6315525 . . . 2,80040,9454
	Leg CE	50141045 . . . 2,70019,3336
	Whole sine	100000,00000 . . . 10,00000,0000
	Sine of the angle CBE gr. <u>525546</u>	79393,31251 . . . <u>9,89978,3882</u>

Of which the complement ECB is gr. 374454.

The same labour is required to be expended in the remainder of triangle AEB, so that the remaining angles may become known.

This problem also can be solved more expediently, and that by a single operation following the precepts, the fundamentals of which is to be sought in Ch. 18 of the Arithm. Logarithum. by the most learned Mr. Briggs.

From half of the combined sides, the sides of the triangle can be taken away one by one ; And the sum of the logarithms, of half the sum of the sides and of the difference of the side subtending the angle sought, may be taken from the sum of the remaining logarithms of the differences and of twice the radius ; half the remainder will be the logarithm of the tangent of half the angle sought.

[This is an expression of the tangent of the half-angle formula of a planar triangle, given by $\tan \frac{A}{2} = \sqrt{\frac{(s-b)(s-c)}{s(s-a)}}$, where s is the semi perimeter, given by $2s = a + b + c$. Note

that the expression is scaled up by a factor of 100000,00000 by including the radius of the whole sine, removing the need for fractions.]

The angle may be sought subtended by the greatest side, evidently ABC.

Showing the precepts by arithmetic.

Transl. Ian Bruce.

<i>Latera.</i>		<i>Logarithms.</i>	
Side AC	<u>12767067</u>		
Side AB	<u>8651765</u>		
Side BC	<u>6315525</u>		
Sum if the sides . .	<u>27734357</u>		
Half the sum	<u>138671785</u>	3,14198,81057
Difference of the side AC	<u>11001115</u>	<u>2,04143,67044</u>
		Sum	5,18342,48101 L
Difference of the side AB	<u>52154135</u>	2,71728,87468
Difference of the side BC	<u>7551653</u>	2,87804,20547
Radius . . .100000,00000 ; twice log. Radius		<u>20,00000,00000</u>
		Sum	25,59533,08015 M
		Sum	<u>5,18342,48101 L</u>
		Difference	20,41190,59914
		Half Differ.	10,20595,29957 is

Logarithm of tangent gr. 581032,
of which the double is gr. 1162064, the angle ABC sought.

PROB. 4.

With the angles and a side given, either remaining side is sought.

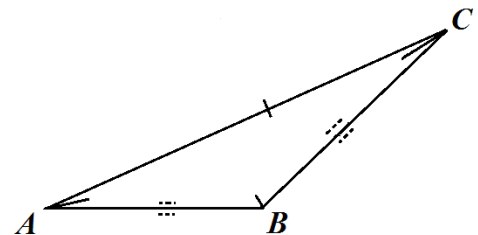
In the oblique angled triangle ABC either side is sought, for example BC

From the given

{	angles	BAC gr. <u>374454</u>
		ACB gr. <u>263482</u>
		ABC gr. <u>1162064</u>
	with side AC <u>12767067</u>	

Proportions. {

- Sine of the angle opposite side.*
- Sine of angle opposite side sought.*
- Side given.*
- Side sought. per Prop. 3. Cap. 2.*



Transl. Ian Bruce.

Shown by arithmetic, for BC.

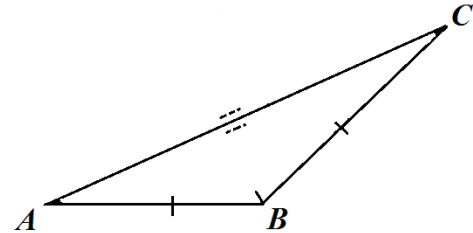
		<i>Sines & Sides.</i>	<i>Log.Sines & Sides.</i>
<i>Proportions.</i>	{	Sine of angle ABC gr. <u>637936</u>	89720,90442 9,95289,36427
		Sine of angle BAC gr. <u>374454</u>	60800,51245 9,78390,72369
		Side AC	<u>12767067</u> <u>3,10609,11422</u>
			12,88999,83791
	Side BC	<u>8651765</u> 2,93710,47364	
For AB			
<i>Proportions.</i>	{	Sine of angle ABC gr. <u>637936</u>	89720,90442 9,95289,36427
		Sine of angle ACB gr. <u>263482</u>	44382,52009 9,64721,19544
		Side AC	<u>12767067</u> <u>3,10609,11422</u>
			12,75330,30966
	Side AB	<u>6315525</u> 2,80040,94539	

PROB. 5.

With two sides given with the angle taken between the same, the remaining side is sought.

In the oblique angled triangle ABC the side AC is sought.

From the given { sides { CB 8651765
 { AB 6315525
 with the angle ABC gr. 1162064



In the first place the remaining angles are sought by Prob.3. of this chapter.

Then with the angles acquired we may seek the remaining side by the problem preceding immediately. There is no need for examples.

Otherwise.

If the given angle may become the centre of a circle, of which the radius is equal to either leg, and from the end of the radius a perpendicular may be drawn to the remaining leg (continued if there shall be a need) then the rectangle from the remaining leg, and with twice the segment between the perpendicular and the periphery subtended by the given angle, with the square of the difference of the two given sides, will be equal to the square of the side sought.

TRIGONOMETRIAE
BRITANNICAE

LIBRI SECUNDI PARS PRIMA

De Triangulis Planis.

CAPUT PRIMUM.

Canonis constructio absoluta, ad usum ipsius illustrandum procedimus, qui praecipue in Triangulorum dimensionibus cernitur. Triangulum est figura tribus lateribus comprehensa. Est autem Triangulum *Planum* vel *Sphaericum*. Planum est superficie plana descriptum; cuius tria latera sunt lineae. Estque *rectangulum* vel *Obliquangulum*. Triangulum Planum Rectangulum est quod habet unicum angulum rectum.

Obliquangulum quod nullum. *Eucl.27 D.1.*

Si Triangulum Rectangulum sit aequicrurum, uterque angulus ad basintest dimidius recti; Et contra. *Ram.3.el.8,* Itaque

Si Trianguli angulus aequetur reliquis,est rectus; Et contra. Et

Si recta a vertice Trianguli bisecans basintest aequalis bisegmento, angulus verticus rectus est.

Triangulum Planum Obliquangulum est *Obtusangulum* vel *Acutangulum*.

Obtusangulum est quod unum habet angulum obtusum. *Eucl.28D.1.*

Acutangulum quod omnes acutos. *Eucl. 29D.1.* Itaque

Si Trianguli Plani angulus sit major reliquis, est obtusus ; si minor reliquis, est acutus. Et

Si recta a vertice Trianguli bisecans basintest minor bisegmento, angulus vertice, obtusus est, si major, angulus verticis acutus est.

Trianguli tres anguli aequantur duobus rectis. *Eucl. 32 p.1.* Itaque

Trianguli duo quilibet anguli sunt minores duobus rectis. Et

Continuato latere, angulus exterior aequatur duobus interioribus oppositis.

Si Triangulum sit aequicrurum, est in basi aequiangulum: Etsi sit aequilaterum, est quoque aequiangulum. *Eucl. 5 & 6 p.6*

Trianguli duo quaelibet latera sunt majora reliquo. *Eucl. 29 p.1.*

Trianguli majus latus subtendit majorem angulum; & angulus major a majore latere subtenditur. *Eucl. 19 & 18 p.1.*

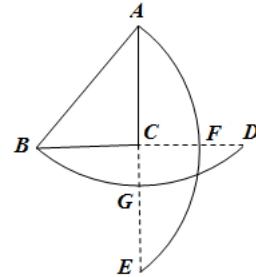
Angulorum sive arcuum Complementa dicuntur vel ad Quadrantem vel ad Semicirculum.

CAPUT II.

PROP. I.

In Triangulo Rectangulo; Si *latus angulum rectum subtendus fiat Radius Circuli, erunt crura Sinus angulorum oppositorum.*

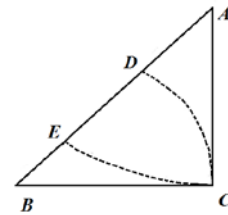
In Triangulo Rectangulo ABC, intervallo AB, & e centris A & B describantur arcus BGD, & AFE; erunt crura AC & BC Sinus angulorum ad A & B: Sunt enim semisses subtensarum ACE, & BCD.



PROP. II.

In Triangulo Rectangulo; Si ex utriusvis acuti puncto angulari, & intervallo cruris alterius, peripheria describatur; Crus alterutrum erit Radius, reliquum Crus erit Radius, reliquum Crus Tangens, Hypotenusa autem (sive latus angulum rectum subtendens) Secans.

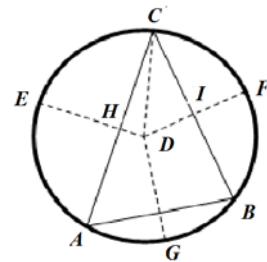
In Triangulo Rectangulo ACB, e puncto angulari B, & intervallo cruris BC, peripheria describatur DC; erit BC Radius, AC Tangent, & BA Secans. Itidem si intervallo AC, peripheria describatur EC, erit AC Radius, BC Tangens, & AB Secans anguli BAC. *per cap.1.lib.1.*



PROP. III.

In quolibet Triangulo plano; *Latera Sinibus oppositorum angulorum sunt proportionalia; Et contra.*

Sit Triangulum ABC, Circulo inscriptum, & e centro D ducantur Radii perpendiculares DF, DE, DG, tam peripheries quam peripheriarum subtensas bisecantes; Radius etiam ducatur DC. Quoniam itaque angulus in centro EDC aequalis est angulo in periphcra ABC; Et CDF aequalis CAB *per 20 prop.3 .Eucl.* Erunt proinde laterum semisses tanquam Sinus. Quam ergo rationem habet latus CA ad latus CB, eandem habet Sinus CH ad Sinum CI. Nam quae est ratio totius ad totum, eadem est semissis ad semissem.

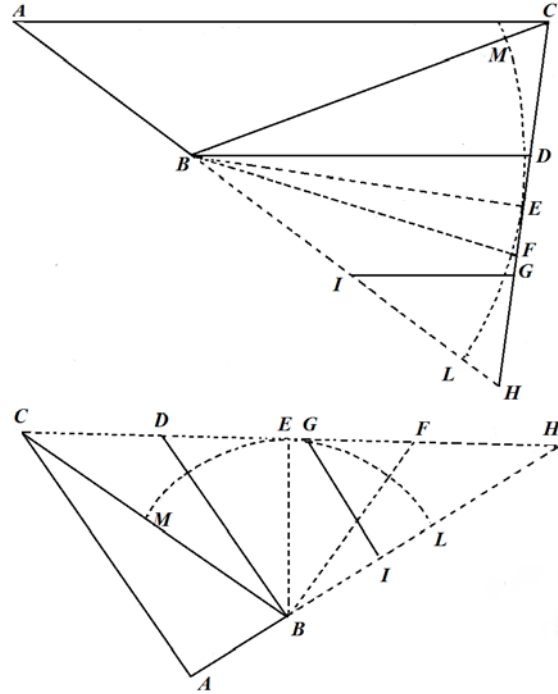


PROP. III.

In Quolibet Triangulo plano. *Ut summa duorum laterum, ad differentiam eorundem ; sic*

Tangens semissis summae angulorum oppositorum, ad Tangentem semissis differentiae eorum.

In Triangulo obliquangulo ABC, sint nota latera AB, CB, una cum angulo ABC, ab iisdem comprehenso, in superior obtusangulo, acutangulo autem in inferiore. Et continuato latere AB in H, usque sit BH aequalis, BC, & connectentur C & H. Sitque BI aequalis lateri AB. E signis quoque B & I ducantur rectae BD & IG parallelae lateri AC. Erit ergo angulus exterior CBH aequalis duobus interioribus oppositis *per 32.1.Eucl.* Est enim angulus CBD aequalis angulo BCA ; & DBH angulus, angulo CAB. A puncto praeterea B perpendicularis ducatur BE, quae CH bisecabit. Radio quoque BE peripheria ducatur MEL. Eritque CE Tangens semissis summae angulorum oppositorum, & DE (qui & aequalis FE) Tangens semissis differentiae. Quoniam itaque AC, BD, IG, sunt parallelae, erunt CD, DG, FH aequales; & idcirco DF & GH aequabuntur. Aio itaque



Proport.	{	AH	IH	CH	CH=DF	vel per aequationem proportionis.	Proport.	{	AH	IH	CE	DE	Summa duarum laterum.	Differentia duarum laterum.	Tangens $\frac{1}{2}$ angulorum oppositorum.	Tangens $\frac{1}{2}$ differentiae angulorum.
----------	---	----	----	----	-------	--------------------------------------	----------	---	----	----	----	----	-----------------------	-----------------------------	--	---

Aliter.

Ut summa laterum, ad minus duplicatum: sic Tangens semissis summae angulorum oppositorum, ad summam Tangentium semissis summae & semissis differentiae angulorum.

Aliter.

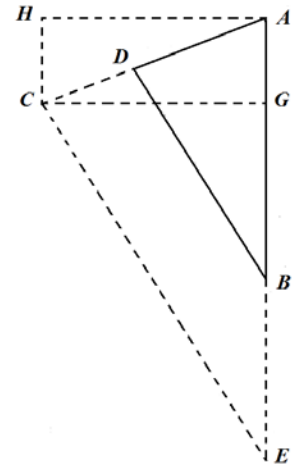
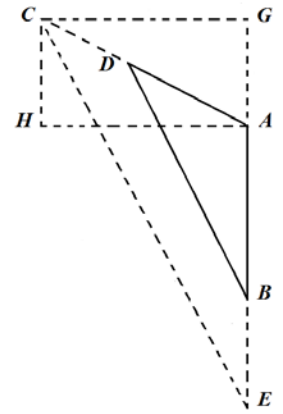
Ut summa laterum, ad minus duplicatum: sic Tangens semissis summae angulorum oppositorum, ad differentiam Tangentium semissis summae & semissis differentiae angulorum.

Propositionis praecedentis demonstration cum adjunctis Diagraphis, his inservire potest. Poterit etiamnum haec quarta Propositio aliter exprimi.

Ut latus minus, ad majus: sic Secans Complementi vel excessus anguli comprehensi, ad quartum.

Quartus iste conferatur cum Tangente Complementi vel excessus. Tum si angulus comprehensus sit obtusus, summa : Sin acutus, differentia est Tangens Complementi anguli lateri minori oppositi.

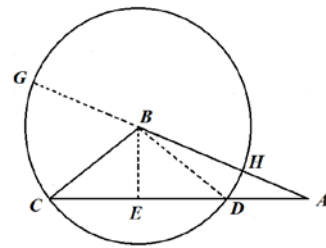
In Triangulo obliquangulo ABD, nota sint latera AB, AD, una cum angulo ab iisdem comprehenso BAD, in Triangulo superiore obtusangulo, acutangulo autem inferiorc. Et continuatus lateribus AB, AD ad usque E & C; a puncta C ducatur recta CE lateri DB parallela, una cum CG perpendiculari rectae AE ubi opus est continuatae. A puncto idem A, ducatur recta AH aequalis & parallela rectae CG, quae connectantur perpendicularibus CH, & AG: AE aequantur itaque Triangula obliquangula DAB, CAE *per 4 & p.6 Eucl*: Itemque Rectangula Trangua CAH, ACG, *per 8 p.1 Eucl*. Eritque CG = AH Radius : GA = HC Tangens, & CA Secans *per 2 prop. huius Capit.*
Aio



Quartus iste conferatur cum GA, Tangente anguli GCA, Tum si angulus comprehensus sit obliquus, summa: sin acutus, differentia erit BE. Tangens anguli GCE ; cujus Complementum est angulus CEG, aequalis angulo DBA; Atque inde per Complementum reliquus angulus ADB.

Proport.	{	DA	Latus minus.	PROP. V.	In
		AB	Latus majus.		
		CA	Secans Complementi vel excessus anguli comprehensi.		
		AE	Quartus. Triangulo Plano. Ut Basis, ad Summam laterum; ita Differentia laterum, ad Differentiam segmentorum Basis.		

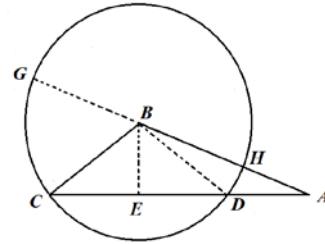
In Triangulo obliquangulo ABC, sit Basis CA, Summa laterum GA, Differentia laterum HA, Differentia segmentorum Basis AD. Ducatur perpendicularis BE bisecans CD in E. Quoniam itaque oblongum AC, AD aequatur oblongo AG, AH *per 36pro.1 Eucl*. erunt propterea latera eorum reciproceproportionala. Aio, itaque



Proport.	{	AC	Basis.	Inde segmentum AE vel CE.
		AG	Summa Laterum.	
		AH	Differentia Laterum.	
		AD	Differentia segmentorum Basis.	

Aliter.

Sumatur differentia quadratorum e lateribus BC, BA, & dividatur per Basim CA, quotus erit differentia segmentorum Basis DA.



Aliter.

Quadrantur latera AB, BC, CA, & auferatur quadratum BA e reliquis, semissis reliqui dividatur per Basim, quotus erit CE minus segmentum Basis.

Et ablato quadrato CB e quadratis BA, AC, semissis reliqui divis per Basim dabit quotum AE majus segmentus Basis.

CAPUT III.

De Modo mutandi Sexagesimas partes in Decimales ; & contra.

Datae partes reducuntur ad aliud Nomen, si numerus datarum partium multiplicet Nomen novum, & factus dividatur per Nomen datarum partium; quotus erit numerus partium quaesitarum. —————

Sunto datae partes $\frac{12}{60}$, & sit datum Nomen novum $\frac{\quad}{100}$; quaeritur numerus huic Nomini ita conveniens ut partes inventae sint datis partibus aequales.

$$\text{Proport.} \left\{ \begin{array}{ll} \text{Nomen datum} & 60 \\ \text{Numerus datus} & 12 \\ \text{Numerus sumptum} & 100 \\ \text{Numerus inventus} & 20 \end{array} \right. \quad \frac{12}{60} \text{ aequales } \frac{20}{100}.$$

Itaque si Nomen sumptum multiplicet numerum datum, & factus dividatur per datum Nomen; quotus erit numerus quaesitus. Et datis minutis vel partibus Sexagesimis (cum Multiplicatio per 100 nihil mutet) fiat divisio per 6, quotus erit numerator quaesitus.

Ut 29 Grad. 27' statuentur sic $29 \frac{27}{60}$, & dividantur 27 per 6, statuaturque quotus in lineae inferiori sic $29 \frac{27}{100} \frac{45}{100}$, quotus est $\frac{45}{100}$, atque is erit numerus quaesitus, & 29 Grad. 27' aequantur $29 \frac{45}{100}$.

Sic motus Lunae diurnus apud Copernicum 12 Grad. 11': 26": 41''': 31'''' : reducitur ad 12.19074776. Sic motus Solis 44 dierum, 43 Gr. 22': 0"; 19''' : reducitur ad 433667546.

31	19
<u>4151667</u>	<u>0031667</u>
26691944	220052777
<u>114448657</u>	<u>4336675463</u>
1219074776	100000000
<u>100000000</u>	

Facilius id fiet ope hujus adjunctae Tabulae, addendo partes Decimales respondentes Minutes Primis, Secundis, Tertiis, & Quartis in unam summam, sic

<p><i>Minutis Primis</i> 11 respondent 1833,333,333</p> <p><i>Secundis</i> 2672,222,222</p> <p><i>Tertiis</i> 41.....1,898,148</p> <p><i>Quartis</i> 31..... <u>23,920</u></p> <p><i>Proveniunt Decimales</i> 1,907,4771623</p>		<p>22 <i>Min. respondent</i> 3666,666,667</p> <p>0 <i>Secundis</i>.....0</p> <p>19 <i>Tertiis</i>..... 879,630</p> <p><i>Proveniunt</i>..... <u>3667,546,297</u></p>
---	--	--

Contra si datae partes Centesimae reducendae sint ad Sexagesimas, fiat datarum partium multiplicatio per 60, factus divisus per 100 (id est, a facto amputatis duabus nobis) dabit numerum Minutorum. Exempli causa.

Sint dati Grad.2445, quaeritur quot Minuta aequentur partibus $\frac{45}{100}$. Fiat multiplicatio 45 numeratoris per 60, factus erit 2700; aio, amputatis duabus cyphris, 27 Minuta aequari 45 Centisimis. Sic

Sit motus Lunae diurnus Gra. 1219074776, fiat multiplicatio partium 19074776 per 60, proveniunt 1144486560 factus primus; eritque motus Lunae diurnus

12 Gr.11 $\frac{44486560}{100000000}$ Minutorum.

Hae Tabula Reductionis Sexagesimarum Partium ad Decimales ; & Contra.

<i>Sexag.</i>	<i>Minut.Primis Respondens</i>	<i>Secundis</i>	<i>Tertiis</i>	<i>Quartis</i>	<i>Quintis.</i>
1	0166,666,667	0002,777,778	0000,046,296	0000,000,772	0000,000,013
2	0333,333,333	5,555,555	, 92,593	, 1,573	, ,026
3	0500,000,000	8,333,333	,138,889	, 2,315	, ,039
4	0666,666,666	11,111,111	,185,185	, 2,315	, ,051
5	0833,333,333	13,888,889	,231,481	, 3,046	, ,064
6	1000,000,000	16,666,667	,277,778	, 4,630	, ,077
7	1166,666,667	19,444,444	,324,074	, 5,401	, ,090
8	1333,333,333	22,222,222	,370,370	, 6,173	, ,103
9	1500,000,000	25,000,000	,416,667	, 6,944	, ,116
10	1666,666,667	27,777,778	,462,963	, 7,716	, ,129
11	1833,333,333	30,555,556	,509,259	, 8,488	, ,141
12	2000,000,000	33,333,333	,555,556	, 9,259	, ,154
13	2166,666,667	36,111,111	,601,852	,10,031	, ,167
14	2333,333,333	38,888,889	,548,148	,10,802	, ,180
15	2500,000,000	41,666,667	,694,444	,11,574	, ,193
16	2666,666,667	44,444,444	,740,741	,12,345	, ,206
17	2833,333,333	47,222,222	,787,037	,13,117	, ,219
18	3000,000,000	50,000,000	,833,333	,13,889	, ,232
19	3166,666,667	52,777,778	,879,630	,14,660	, ,245
20	3333,333,333	55,555,555	,925,926	,15,432	, ,258
21	35,00,000,000	58,333,333	,972,222	,16,204	, ,270
22	3666,666,667	61,111,111	1,018,578	,16,975	, ,283
23	3833,333,333	63,888,889	1,064,814	,17,747	, ,296
24	4000,000,000	66,666,667	1,111,111	,18,518	, ,309
25	4166,666,667	69,444,444	1,157,407	,19,290	, ,322
26	4333,333,333	72,222,222	1,203,703	,20,062	, ,335
27	4500,000,000	75,000,000	1,250,000	,20,833	, ,348
28	4666,666,667	77,777,778	1,296,296	,21,605	, ,360
29	4833,333,333	80,555,555	1,342,592	,22,376	, ,373
30	5000,000,000	83,333,333	1,388,888	,23,148	, ,386
31	5166,666,667	86,111,111	1,435,184	,23,920	, ,399
32	5333,333,333	88,888,889	1,481,481	,24,691	, ,412
33	5500,000,000	91,666,667	527,777	,25,463	, ,425
34	5666,666,667	94,444,444	1,574,073	,26,234	, ,438
35	5833,333,333	97,222,222	1,620,370	,27,006	, ,450
36	6000,000,000	100,000,000	1,666,666	,27,778	, ,463
37	6166,666,667	102,777,778	1,712,963	,28,549	, ,476
38	6333,333,333	105,555,555	1,759,259	,29,321	, ,489
39	6500,000,000	108,333,333	1,805,556	,30,092	, ,502
40	6666,666,667	111,111,111	1,851,852	,30,864	, ,515
41	6833,333,333	113,888,889	1,898,148	,31,636	, ,527
42	7000,000,000	116,666,667	1,944,444	,32,407	, ,540
43	7166,666,667	119,444,444	1,990,740	,33,179	, ,553
44	7333,333,333	122,222,222	2,037,037	,33,950	, ,566
45	7500,000,000	125,000,000	2,083,333	,34,722	, ,579
46	7666,666,666	127,777,778	2,129,629	,35,494	, ,592
47	7833,333,333	130,555,555	2,175,925	,36,265	, ,605
48	8000,000,000	133,333,333	2,222,222	,37,037	, ,618
49	8166,666,667	136,111,111	2,268,518	,37,808	, ,630
50	8333,333,333	138,888,889	2,314,815	,38,580	, ,643
51	8500,000,000	141,666,667	2,361,111	,39,352	, ,656
52	8666,666,667	144,444,444	2,407,407	,40,123	, ,669
53	8833,333,333	147,222,222	2,453,703	,40,895	, ,682
54	9000,000,000	150,000,000	2,500,000	,41,666	, ,694
55	9166,666,667	152,777,778	2,546,296	,42,438	, ,707
56	9333,333,333	155,555,555	2,592,592	,43,210	, ,720
57	9500,000,000	158,333,333	2,638,889	,43,981	, ,733
58	9666,666,667	161,111,111	2,685,185	,44,753	, ,746
59	9833,333,333	163,888,889	2,731,481	,45,524	, ,759

Hae partes decimales 44486560 eodem modo reducuntur ad Minuta secunda multiplicatione per 60, sic

1144486560
2669193600
4151616000
3096960000
5817600000

Et eodem modo Decimales secundorum ad tertia Minuta, &c.

Sic Solis motus in diebus 44 est

Gr. 4336675463
2200527780
0031666800
190008000

Idem Solis motus in diebus 44 est 43 Grad. 22': 00": 19'''

Nota a factis ubique amputari octo, tot scilicet quot sunt in Numeratore datarum partius ; reliqui sunt Minuta Prima, Secunda, Tertia, &c.

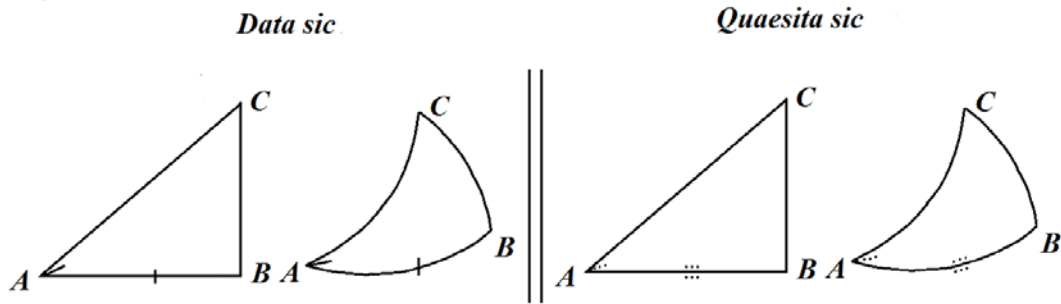
Ope praecedentis Tabulae licet quoque continua subtractione proxime minorum in ea repertarum partium Decimalium a datis, Sexagesimas iis respondentes acquirere. Sic

<i>Partes datae</i> 1907,477,6	<i>Partes datae</i> 3667,546,3
<i>Inventae</i> <u>1833,333,3</u> ... 11 <i>Min. Prima.</i>	<i>Inventae</i> <u>3666,666,6.19</u> <i>Min.Prima.</i>
74,144,3	879,7
<i>Inventae</i> ... <u>72,122,2</u> 26 <i>Secunda.</i>	<i>Inventae</i> 879,6, 19 <i>Tertia.</i>
1,922,1	
<i>Inventae</i> ... <u>1,898,1</u> 41 <i>Tertia.</i>	
24,0	
<i>Inventae</i> ... 23,9..... 31 <i>Quarta.</i>	

CAPUT III.

De Dimensione Triangulorum Planorum Rectangulorum.

In Triangulorum omnium solutionibus exprimentur.



Praeterea in Triangulis Rectangulis tam Planis quam Spaericis, *Hypotenusa* dicatur latus subtendens angulo rectum, ut Latus AC subtendens angulum ABC.

Crura autem dicanturque angulum comprehendunt rectum, ut latera AB CB.

Sciat insuper Trigonometer, in dimensione Triangulorum per Regulam proportionum in qua sunt quatuor termini, tres dati, quartus quaesitus; Si termini rationum sint Sinus, Tangentes, Secantes, aut latera, facto a secundo & tertio per primum diviso, quotum exhibere quartum.

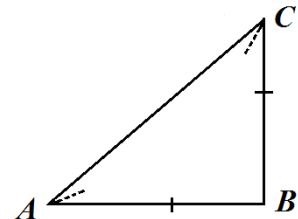
Si termini rationum sint Logarithmi Sinuum, Tangentium, Secantium, aut laterum; Si e summa Logarithmorum secundi & tertii subducatur Logarithmus primi, differentia erit Logarithmus quarti.

PROBL. 1.

Datis Cruribus,
 Quaeritur ANGULUS alteruter.

In Triangulo Rectangulo ABC quaeritur acutus alteruter

$$\text{E datis cruribus} \begin{cases} AB & 11237943 \\ BC & 6058601 \end{cases}$$



Termini Rationis

Proport. { *Crus alternum.*
Crus reliquum.
Radius.
Tangens anguli cruri reliquo oppositi, per Prop.2.Cap.2.

Illustratio Arithmetica.

	<i>Crura & Tang.</i>	<i>Logarith.Crura & Tang.</i>
{ <i>Crus AB</i>	<u>11237943</u>	3,05068,6815
{ <i>Crus reliquum BC</i>	<u>6058601</u>	2,78237,2352
{ <i>Radius AB</i>	100000,00000	10,00000,0000
{ <i>Tangens BAC</i> gr. <u>2833</u>	53912,01159	9,73168,5537

Hinc pro Complem. BCA gr.6167.

Nota. Petendi sunt Logarithmi laterum e Logarithmorum Chiliadibus sive Arithmetica Logarithmica doctissimi *D.Briggii*. Qui vero ipsa destituuntur, abunde iis satisfaciet Canon hic, modo reiciamus Characteristicam, & aliam (prout exigunt numeri) substituamus. Quod si accurate in eo non occurrunt, possunt tamen per partem proportionalem quam proxime obtineri; Exempi gratia sic : Crus BC 6058601 in Canone quaerentes, invenimus illud inter Tangentes juxta Gr.3121 cuius Logarith. est 9,78237,23521. Excluso itaque numero novenario sive Characteristica, substituimus numerum binarium, crescente vel decrescente semper Characteristica pro numero locorum ultra unitatis locum. Quod si numero integro partes adhaeserint, quales sunt illae partes decimales linea subscripta ab integris distinctae, licet totus numerus pluribus notis scribatur, eius tamen Characteristica respicit tantum illas notas quibus integrae unitates scribuntur, reliquarum subsequentium notarum, quibus partes adjuncte exprimentur, nulla habita ratione ut

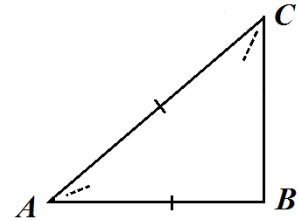
	<i>Logarithmi</i>
<u>11237943</u>	1,05068,6815
<u>11237943</u>	2,05068,6815
<i>Crus AB</i> <u>11237943</u>	3,05068,6815
<u>11237943</u>	4,05068,6815

PROBL. 2.

*Dati Crure & Hypotensa,
 Quaeritur ANGULUS alteruter.*

In triangulo Rectangulo ABC quaeritur angulus acutus alteruter

$$\text{E datis } \begin{cases} \text{Crure AB} & . & . & . & . & . & 11237943 \\ \text{Hypotensa AC} & . & . & . & . & . & 12767067 \end{cases}$$



Termini Rationis

$$\text{Proport. } \left\{ \begin{array}{l} \text{Hypotensa data.} \\ \text{Crus datum.} \\ \text{Sinus Totus.} \\ \text{Sinus anguli cruri dato oppositi. per Prop.1.Cap.2.} \end{array} \right.$$

Illustratio Arithmetica.

	<i>Latera & Sinus.</i>	<i>Logar.Lat. & Sinuum.</i>
$\text{Proport. } \left\{ \begin{array}{l} \text{Hypotensa AC} \\ \text{Crus BC} \\ \text{Sine Totus ABC} \\ \text{Sinus ACB} \end{array} \right.$	$\begin{array}{l} . & . & 12767067 & . & . \\ . & . & 11237943 & . & . \\ \text{gr.}9000 & 100000,00000 & . & . & . \\ \text{gr.}6167 & 88022,90008 & . & . & . \end{array}$	$\begin{array}{l} 3,10609,1142 \\ 3,05008,6815 \\ 10,00000,0000 \\ 9,94459,5673 \end{array}$

Cuius Complementum gr.2833 est angulus reliquus BAC.

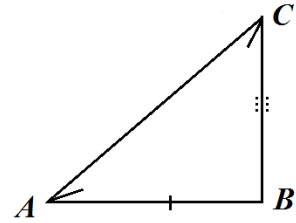
Aliter.

$$\text{Proport. } \left\{ \begin{array}{l} \text{Crus datum.} \\ \text{Hypotensa data.} \\ \text{Radius.} \\ \text{Secans anguli a datis comprehensi.} \end{array} \right.$$

At hac varietate non est opus, propter facilem Logarithmorum usum.

PROBL. 3.
Datis Angulis & Crure,
Quaeritur CRUS reliquum.

In Triangulo Rectangulo ABC quaeritur Crus BC



$$E \text{ datis } \left\{ \begin{array}{l} \text{Crure AB} \dots\dots 11237943 \\ \text{Angulis } \left\{ \begin{array}{l} \text{ACB gr.}6167 \\ \text{BAC gr.}2833 \end{array} \right. \end{array} \right.$$

Termini Rationis

$$Proport. \left\{ \begin{array}{l} \text{Radius.} \\ \text{Tangens anguli cruri dato contermini.} \\ \text{Crus datum.} \\ \text{Crus quasitumi. per Prop.2.Cap.2.} \end{array} \right.$$

Illustratio per numeros.

	<i>Tang. & Crura.</i>	<i>Logar.Tang. & Crura.</i>
Radius AB100000,00000 . .	100000,00000
Tangens. BAC gr.2833 53912,01159 . .	9,73168,5536
Crus AB 11237943 . .	. 3,05068,6815
Crus BC 6058601 \surd 2,78237,2351

Aliter.

$$Proport. \left\{ \begin{array}{l} \text{Sinus anguli cruri dato oppositi.} \\ \text{Sinus anguli cruri quaesito oppositi.} \\ \text{Crus datum.} \\ \text{Crus quasitum} \end{array} \right.$$

Aliter.

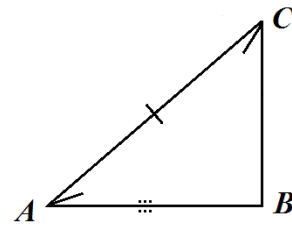
$$\text{Proport.} \left\{ \begin{array}{l} \text{Tangens anguli cruri dato oppositi.} \\ \text{Radius.} \\ \text{Crus datum.} \\ \text{Crus quasitum} \end{array} \right.$$

PROBL. 4.

*Datis Hypotenusa & Angulis,
Quaeritur CRUS utrumlibet.*

In Triangulo Rectangulo ABC quaeritur Crus AB

$$\text{E datis} \left\{ \begin{array}{l} \text{Hypotenusa AC} \dots 12767067 \\ \text{Angulis} \left\{ \begin{array}{l} \text{ACB gr.}6167 \\ \text{BAC gr.}2833 \end{array} \right. \end{array} \right.$$



Termini Rationis

$$\text{Proport.} \left\{ \begin{array}{l} \text{Sinus Totus.} \\ \text{Sinus anguli Cruri quaesito contermini.} \\ \text{Hypotenusa data.} \\ \text{Crus quasitum. per Prop.1.Cap.2.} \end{array} \right.$$

Illustratio Arithmetica.

	<i>Sinus. & Latera</i>	<i>Logar.Sin. & Lat.</i>
Sinus totus	100000,00000	. . 10,00000,0000
Sinus ACB gr.6167	88022,90008	. . 9,94459,5673
Hypotenusa AC	12767067	. . 3,10609,1142
Crus AB	11237943	. . 3,05068,6815

Poterit etiam Problema istud per Secantes & Tangentes expediri, at propter supervacaneum eorum usum consulto omisimus

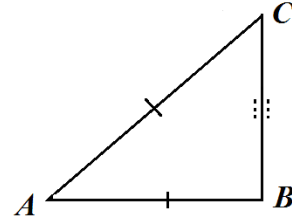
PROBL. 5

*Datis Hypotenusa & Crure,
Quaeritur CRUS reliquum.*

In Triangulo Rectangulo ABC quaeritur Crus BC

$$\text{E datis } \begin{cases} \text{Hypotenusa AC} \dots\dots 12767067 \\ \text{Crure AB} \dots\dots 11237943 \end{cases}$$

Solutionem hujus Problematis subministrat 47 Prop. 1. Eucl.
 Quoniam enim in Triangulo Rectangulo Hypotenusa aequae potest Cruribus; Latus idcirco differentiae quadratorum Hypotenusae & Cruris erit Crus quaesitum. Qui hujusmodi artificii capiuntur, consulant doctissimi *D. Briggii Arith. Logarit. cap. 18. & 19.* Quoniam vero praesentis est instituti nostri, usum Canonis illustrare, ideo Problema istud cum aliquibus sequentibus illius ope aggredimur, duplice ad hujus solutionem praxi concurrente; quarum prior angulum, posterior crus exhibet.



Termini Rationum

I. per Probl. 2.

$$\text{Proport. } \begin{cases} \text{Hypotenusa data.} \\ \text{Crus datum.} \\ \text{Sinus Totus.} \\ \text{Sinus anguli Cruri quaesito contermini. per Prop. 1. Cap. 2.} \end{cases}$$

II.

II. per Probl. 3.

$$\text{Proport. } \begin{cases} \text{Sinus Totus.} \\ \text{Sinus anguli Cruri quaesito contermini.} \\ \text{Hypotenusa data.} \\ \text{Crus quaestum.} \end{cases} \begin{cases} \text{Radius.} \\ \text{Tangens anguli Cruri dato contermini.} \\ \text{Crus datum.} \\ \text{Crus quaestum.} \end{cases}$$

Transl. Ian Bruce.

Illustratio Arithmetica.

I. *Latera & Sinus.* *Logar.Lat. & Sin.*

{	Hypotenusa AC . . .	12767067	. . .	3,10609,1142
	Crus AB . . .	11237943	. . .	3,05068,6815
	Sinus totus . . .	100000,00000	. . .	10,00000,0000
	Sinus ACB gr.6167 . . .	88022,90008	. . .	9,94459,5673

II.

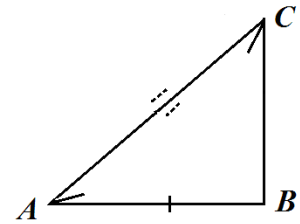
{	Sinus totus	100000,00000	. . .	10,00000,0000
	Sinus anguli CAB gr.2833 . . .	47454,91609	. . .	9,67628,1209
	Hypotenusa AC	12767067	. . .	3,10609,1142
	Crus BC	6058601	. . .	2,72837,2351

PROBL. 6.

*Datis Angulis & Crure,
Quaeritur Hypotenusa.*

In Triangulo Rectangulo ABC quaeritur Hypotenusa AC

E datis {	Crure AB	11237943
	Angulis {	{ ACB gr.6167 BAC gr.2833



Termini Rationis

Proport. {	<i>Sinus anguli Cruri dato oppositi.</i>
	<i>Sinus Totus.</i>
	<i>Crus datum.</i>
	<i>Hypotenusa quasita. per Prop.1.Cap.2.</i>

Illustratio Arithmetica.

Sinus. & Latera *Logar.Sin. & Lat.*

{	Sinus ACB gr.6167 . . .	88022,90008	. . .	9,94459,5673
	Sinus totus	100000,00000	. . .	10,00000,0000
	Crus AB	11237943	. . .	3,05068,6815
	Hypotenusa AC	12767067	. . .	3,10609,1142

Aliter

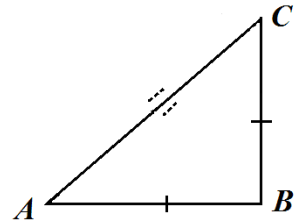
Termini Rationis

Proport. { *Radius.*
Secans anguli cruri dato contermini.
Crus datum.
Hypotenusa quasita. per Prop.2.Cap.2.

PROBL. 7.
Datis Cruribus,
Quaeritur Hypotenesa.

In Triangulo Rectangalo ABC quaeritur Hypotenesa AC

E datis { Cruribus { AB 11237943
 BC 6058601



Termini Rationum.

1. Pro Angulo acuto alteruto

Proport. { *Crus alternum.*
Crus reliquum.
Radius.
Tangens anguli cruri reliquo oppositi. per Prop.2.Cap.2.

II. Pro Hypotenusa

Proport. { *Sinus anguli cruri oppositi.*
Crus illi angulo oppositum.
Sinus Totus.
Crus Hypotenusa quaesta. } vel Proport. { *Radius*
Secans anguli cruri contermini
Crus angulo conterminum
Hypotenusa quaesta. per Prop.2Cap.2.

Illustratio per numeros.

	<i>Crura & Tang.</i>	<i>Logarith.Crur. & Tang.</i>
{ <i>Crus AB</i>	11237943 3,05068,6815
{ <i>Crus BC</i>	6058601 2,78237,2352
{ <i>Radius AB</i>	100000,00000 10,00000,0000
{ <i>Tangens BAC</i> gr. 2833	53912,01159 9,73168,5537
	<i>Sinus. & Latera. II</i>	<i>Logar.Sin. & Lat.</i>
{ <i>Sinus CAB</i> gr.2833	47454,91609 9,67628,1209
{ <i>Sinus Totus</i>	100000,00000 10,00000,0000
{ <i>Crus BC</i>	6058601 2,78237,2352
{ <i>Hypotenusa AC</i>	12767067 3,10609,1142

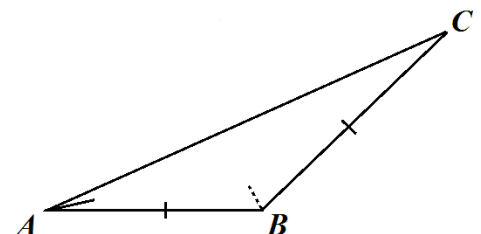
CAPUT V.

De Dimensione Triangulorum Planorum Obliquangulorum.

PROBL.1.

Datis Duobus Lateribus & Angulo alteri datorum opposito,
Quaeritur ANGULUS lateri reliquo oppositus.

In Triangulo Obliquangulo ABC quaeritur angulus obtusus ABC



Transl. Ian Bruce.

$$E \text{ datis } \left\{ \begin{array}{l} \text{Lateribus } \left\{ \begin{array}{l} AC \quad 12767067 \\ BC \quad 8651765 \end{array} \right. \\ \text{Angulo CAB gr. } 374454 \end{array} \right.$$

Termini Rationis

$$Proport. \left\{ \begin{array}{l} \text{Latus alteruum.} \\ \text{Latus reliquum.} \\ \text{Sinus anguli lateri alteri oppositi.} \\ \text{Sinus anguli lateri reliquo oppositi. per Prop.3.Cap.2.} \end{array} \right.$$

Illustratio Arithmetica.

	<i>Latera & Sin.</i>	<i>Logar.Lat. & Sin.</i>
{	Latus BC 8651765 2,93710,4743
	Latus AC 12767067 3,10609,1142
	Sinus BAC gr. 374454 60800,51245 9,78390,7237
	 12,88999,8379 <i>Summa</i>
	Sinus ABC gr.1162064 89720,90422 9,95289,3642 <i>Differ.</i>

Hinc per Complementum reliquus angulus gr.263482.

Nota. Si datus angulus sit obtusus, latus ei oppositum erit maius utrolibet reliquorum, et reliqui duo anguli erunt acuti.

Sin datus angulus sit acutus & denter latera, incertum erit an angulus lateri majori oppositus sit obtusus, rectus, an acutus ; Idem tamen erit quartus proportional Sinus nempe anguli acuti vel Complementi eius ad duos rectos.

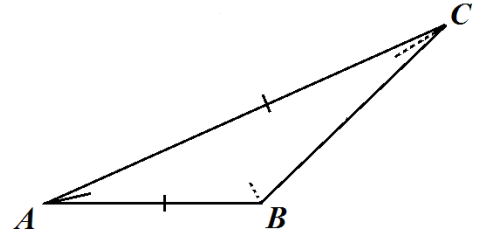
Ut igitur scire possimus qualis sit angulus qui maximo lateri opponitur, sumantur summa & differentia maximi lateris & medii (vel minimi) earumque Logarithmi ; Et si horum semissis aequetur Logarithmo tertii lateris, angulus maximo lateri oppositus est rectus. Sin Logarithmus tertii lateris fuerit maior semisse, angulus acutus; sin minor, obtusus. Quemadmodum doctissimus *D.Briggius ad Cap. 18. Arith.Logarithmicæ, Editionis Londiniensis.*

PROBL. 2.

Datis duobus Lateribus cum Angulo ab iisdem comprehenso,
 Quaeritur ANGULUS alteruter reliquorum.

In Triangulo Obliquangolo ABC quaeritur Angulus
 alteruter ad B vel C

$$\text{E datis } \left\{ \begin{array}{l} \text{Lateribus } \left\{ \begin{array}{l} \text{AC } 12767067 \\ \text{AB } 6315525 \end{array} \right. \\ \text{Angulo BAC gr. } 374454 \end{array} \right.$$

*Termini Rationis*

$$\text{Proport. } \left\{ \begin{array}{l} \text{Differentia laterum.} \\ \text{Tangens semissis summae angulorum oppositorum;} \\ \text{vel semissis Complementi anguli comprehensi.} \\ \text{Tangens semissis differentiae angulorum oppositorum} \end{array} \right.$$

Transl. Ian Bruce.

Illustratio per numeros.

Latus AC	<u>12767067</u>
Latus AB	<u>6315525</u>
Summa laterum	1908 <u>2592</u> D
Differentia laterum	645 <u>1542</u> E
Maius latus duplicatum	25534 <u>134</u> G
Minus latus duplicatum	12631 <u>050</u> H
Angulus datus comprehensus	gr. 37 <u>4454</u>
Integer Circulus	gr. 180 <u>0000</u>
Summa reliqorum	gr. 142 <u>5546</u>
Semissis summae	gr. 71 <u>2773</u> F

		<i>Latera & Tang.</i>	<i>Logar.Lat. & Tang.</i>
<i>Proport.</i>	{	Summa Laterum D	1908 <u>2592</u> 3,28063,7363
		Differentia laterum E	645 <u>1542</u> 2,80966,3527
		Tang. $\frac{1}{2}$ summae angulorum F <u>712773</u>	295052,31525. <u>10,46989,9013</u>
			13,27956,2540 <i>sum.</i>
		Tangens $\frac{1}{2}$ differentiae gr. 449 <u>291</u>	99752,82205 9,99892,5177 <i>diff.</i>
	Huic semisummae angulorum gr. <u>712773</u>	<u>712773</u>	
	Si addatur semidifferentia gr. 449 <u>291</u> . Sin subtrahatur $\frac{1}{2}$ differ.	<u>449291</u>	
	Conflatur angulus obtusus ABC gr. 116 <u>2064</u> . Restabit acutus ACB	<u>263482</u>	

Aliter

		<i>Latera & Tang.</i>	<i>Logar.Lat. & Tang.</i>
<i>Proportions.</i>	{	Summa Laterum	1908 <u>2592</u> D 3,28063,7363
		Maius latus duplicatum	25534 <u>134</u> G 3,40712,1125
		Tang. $\frac{1}{2}$ summae angulorum <u>712773</u> F.	295052,31525. <u>10,46989,9013</u>
		Summa Tangentium $\frac{1}{2}$ summae &	13,87702,0138
		$\frac{1}{2}$ differentiae angulorum	<u>394805,13730</u> 10,59638,2775
	Differentia Tangentium est	99752,82205	
	Arcus conveniens huic differentiae est	<u>449291</u>	
	Semissis summae angulorum oppositorum	<u>772773</u>	
	Summa est Angulus ABC	<u>1162064</u>	
	Differentia est Angulus ACB	<u>263482</u>	

Transl. Ian Bruce.

Aliter.

	<i>Latera & Tang.</i>	<i>Logar.Lat. & Tang.</i>	
{	Summa Laterum	1908 <u>2592</u> D	3,28063,7363
	Minus latus duplicatum	1263 <u>1050</u> H	3,10143,9454
	<i>Proport.</i> Tang. $\frac{1}{2}$ summae angulorum	<u>712773</u> F. 295052,31525.	<u>.10,46989,9013</u>
	Differentia Tangentium $\frac{1}{2}$ summae &		13,87702,0138
	$\frac{1}{2}$ differentiae angulorum oppos.	<u>195299,49319</u>	10,29070,1104
	Differentia Tangentium est	99752,82205	
	huic differentiae Tangentium convenit arcus	<u>449291</u>	
	Semissis summae angulorum oppositorum	<u>772773</u>	
	Summa horum est Angulus ABC	116 <u>2064</u>	
	Difference est Angulus ACB	263 <u>482</u> ut supra.	

Aliter.

Retentis iisdem datis videlicet lateribus AC 12767067 & AB 6315525 eundem acutum comprehendentibus, Gr. 374454. Cuius Complementi Gr. 525546 Secans est 164472,30008 & Tangens est 130580,00340.

	<i>Latera.</i>	<i>Logar.lat.</i>	
{	Latus minus AB	<u>6315535</u>	2,80040,9454
	Latus maius AC	<u>12767067</u>	3,10609,1142
	Sicans Compl. anguli comprehensi	164472,3001	<u>0,21609,2763</u>
	Quartus	332486,6875	3,32218,3905

E quarto isto auferatur Tang.Compl. 130580,0034

Differentia erit tangens gr. 636518 201906,6941

Cuius Complementum gr. 263482 angulus ACB lateri minori oppositus ;
atque inde obtusus per Complementum 1162064.

Sin angulus comprehensus sit obtusus, videlicet Grad. 1162064 cujus excessus

$$262064 \left\{ \begin{array}{l} \text{Secans est } 111456,74557 \\ \text{Tang. est } 48219,97608 \end{array} \right\} \left| \text{Et Latera } \left\{ \begin{array}{l} \text{AB } 6315525 \\ \text{BC } 8651765 \end{array} \right\} \right| \text{Erunt}$$

	<i>Latera.</i>	<i>Logar. laterum.</i>
Latus minus AB	6315535	. . 2,80040,9454
Latus maius BC	8651765	. . 2,93710,4737
Sicans Compl. anguli comprehensi	11145,74557	. . 0,04710,6357
		. . 2,98421,1094
Quartus	152686,84239	. . 0,18380,1640

Huic quarto adde Tang. excessus Anguli 49219,97608

Summa est Tangens 636518 201906,81847

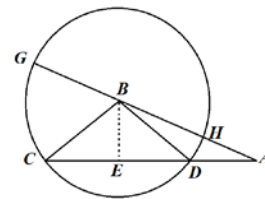
Cuius Complementum est 263482 Angulus ACB lateri minori oppositus ;
atque inde acutus BAC 37445 ut supra.

PROBL. 3.

*Datis singulis Lateribus,
Quaeritur ANGULUS quilibet.*

In Triangulo Obliquangulo ABC quaeritur angulus quilibet, puta BAC

$$\text{E datis singulis lateribus } \left\{ \begin{array}{l} \text{AC } 12767067 \\ \text{AB } 8651765 \\ \text{BC } 6315525 \end{array} \right.$$



Ad hujus Problematis solutinem duae requiruntur operationes ; Prior pro segmento Basis DA. Posterior pro angulo quaesito.

I. Pro Segmento DA.

Termini Rationis.

$$\text{Proport. } \left\{ \begin{array}{l} \text{Latus maximum, sive Basis.} \\ \text{Summa reliquorum.} \\ \text{Differentia reliquorum.} \\ \text{Differentia segmentorum Basis.} \end{array} \right.$$

Illustratio per numeros.				
		<i>Latera & Tang.</i>	<i>Logar.Lat. & Tang.</i>	
Proport.	{	Latus maximum AC	<u>12767067</u> 3,10609,1142	
		Summa reliquorum AB, BC	<u>14965525</u> 3,17514,3173	
		Differentia reliquorum HA	<u>3446240</u> <u>2,36851,7458</u>	
		Differentia segmentor.Basis AD	2738858	5,54366,0621
		Differentia huius & Basis CD	10028209	2,43756,9479
		Cuius semissis CE vel DE	5014145	
		Inde AE	<u>7752962</u>	

His segmentis instructi, alterutri Trianguli Rectanguli angulos venare poterimus per *Prob.2.Cap.3.* Nos vero angulum ECB seligimus.

Termini Rationis.

Proport.	{	<i>Crus datum.</i>
		<i>Hypotenusa data.</i>
		<i>Radius.</i>
		<i>Secans anguli a datis comprehensi.</i>

Illustratio Arithmetica.

			<i>Latera & Secant.</i>	<i>Logar.Lat. & Secant.</i>
Proport.	{	Crus datum CE.	<u>50141045</u> 2,70019,3336	
		Hypotenusa CB	<u>6315525</u> 2,80040,9454	
		Radius	100000,00000 10,00000,0000	
		Secans anguli ECB gr. <u>374454</u>	125955,19299 10,10021,6118	

Quoniam vero Secantium Logarithmos non exhibit Canon hic, sit tamen e duplo Radii subtrahatur quartus iste, qui revera est Logarithmus Secantis; restabit Logarithmus Sinus Complementi anguli ECB. Exempli gratia.

Duplus Radii	20,00000,0000
Logarithmus Secantis	<u>10,10021,6118</u>
Logar.Sinus CBE gr. <u>525546</u>	9,89978,3882
Ergo angulus ECB gr. <u>374454</u> .	

	<i>Latera & Sin.</i>	Vel	<i>Logar.Lat. & Sin.</i>
<i>Proport.</i> {	Hypotenusa CB	6315525	. . 2,80040,9454
	Crus CE	50141045	. . 2,70019,3336
	Sinus Totus	100000,00000	. . 10,00000,0000
	Sinus anguli CBE gr. <u>525546</u>	79393,31251	. . <u>9,89978,3882</u>
	Cuius Complementi ECB gr. <u>374454</u> .		

Idem labor repetendus est in reliquo Triangulo AEB, ut anguli innotescant reliqui.

Poterit etiam hoc Problema expedite magis solvi, idque unica operatione per praeceptum sequens, cuius fundamentum petendum est e Doctissimi D.Briggii Arithm.Logarithmm. Cap.18.

De dimidio collectorum laterum, Latera Trianguli sigillatim subducantur ; Et summa Logarithmorum, semissis summae laterum, & differentiae lateris angulum quaesitum subtendentis, auferatur e summa Logarithmorum reliquarum differentiarum & duplicati Radii; semissis reliqui erit Logarithmus Tangentis semissis anguli quaesiti.

Quaeratur Angulus a latere maximo subtendus, videlicet ABC.

Praecepti illustratio Arithmetica.

Transl. Ian Bruce.

<i>Latera.</i>		
Latus AC	<u>12767067</u>	
Latus AB	<u>8651765</u>	
Latus BC	<u>6315525</u>	
Summa Laterum . .	<u>27734357</u>	<i>Logarithmi.</i>
Semissis Summae	<u>138671785</u>	3,14198,81057 } 2,04143,67044 }
Differentia lateris AC	<u>11001115</u>	
		Summa 5,18342,48101 L
Differentia lateris AB	<u>52154135</u>	2,71728,87468 } 2,87804,20547 }
Differentia lateris BC	<u>7551653</u>	
Radius	100000,00000 duplus Radii	20,00000,00000 }
		Summa 25,59533,08015 M
		Summa <u>5,18342,48101 L</u>
		Differentia 20,41190,59914
		Semissis Differ. 10,20595,29957 est
Logarithmus Tangentis gr.	<u>581032</u>	
Cuius duplum est	gr. <u>1162064</u>	Angulus ABC quaesitus.

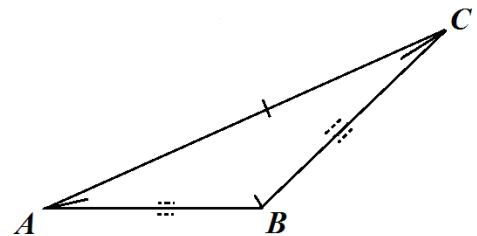
PROBL. 4.

*Datis Angulis & Latere,
Quaeritur LATUS alterutrum reliquorum.*

In Triangulo Obliquangulo ABC quaeritur latus alterutrum, puta BC

$$\text{E datis} \left\{ \begin{array}{l} \text{Angulis} \left\{ \begin{array}{l} \text{BAC gr. } \underline{374454} \\ \text{ACB gr. } \underline{263482} \\ \text{ABC gr. } \underline{1162064} \end{array} \right. \\ \text{Latera AC} \quad \underline{12767067} \end{array} \right.$$

Proport. { *Sinus anguli lateri dato oppositi.*
Sinus anguli lateri quaesito oppositi.
Latus datum.
Latus quaesitum. per Prop. 3. Cap. 2.



Illustratio Arithmetica, Pro BC.

		<i>Sin. & Lat.</i>	<i>Logar. Sin. & Lat.</i>
Proport.	{ Sinus anguli ABC gr. <u>637936</u>	89720,90442	9,95289,36427
	{ Sinus anguli BAC gr. <u>374454</u>	60800,51245	9,78390,72369
	{ Latus AC	<u>12767067</u>	<u>3,10609,11422</u>
			12,88999,83791
	{ Latus BC	<u>8651765</u>	2,93710,47364

Pro AB

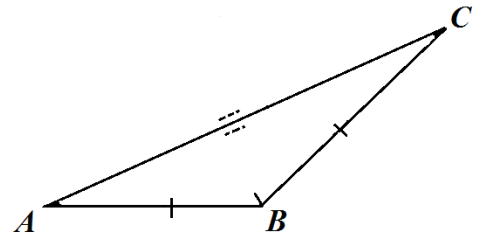
Proport.	{ Sinus anguli ABC gr. <u>637936</u>	89720,90442	9,95289,36427
	{ Sinus anguli ACB gr. <u>263482</u>	44382,52009	9,64721,19544
	{ Latus AC	<u>12767067</u>	<u>3,10609,11422</u>
			12,75330,30966
	{ Latus AB	<u>6315525</u>	2,80040,94539

PROBL. 5.

*Datus Lateribus duobus cum Angulo ab iisdem comprehenso,
Quaeritur LATUS reliquum.*

In Triangulo Obliquangulo ABC quaeritur Latus AC

$$E \text{ datis } \left\{ \begin{array}{l} \text{Lateribus } \left\{ \begin{array}{l} CB \quad \underline{8651765} \\ AB \quad \underline{6315525} \end{array} \right. \\ \text{Angulo ABC gr. } \underline{1162064} \end{array} \right.$$



Primo quaerantur anguli reliqui *per Probl.3:huius*.

Deinde acquisitis angulis indagamus latus reliquum *per Problema immediate praecedens*. Exemplis non opus est.

Aliter.

Si datus Angulus fiat Centrum Circuli cujus Radius altera Cruri aequatur, & a termino Radii ducatur Perpendicularis in Crus reliquum (si opus sit continuatum) Oblongum e reliquo Crure, & duplicato segmento inter perpendicularum & peripheriam dato angulo subtensam, cum quadrato differentiae datorum Laterum, aequabitur Quadrato Lateris quaesiti.